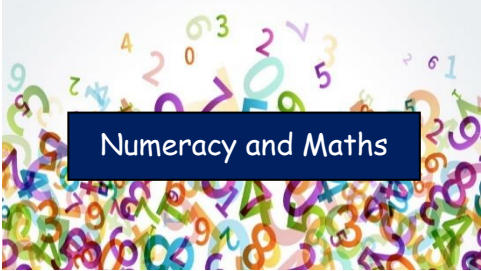






Curricular Area	Tasks
 <p data-bbox="224 391 571 454">Numeracy and Maths</p>	<p data-bbox="1299 263 1444 295"><u>Numeracy</u></p> <ul data-bbox="660 343 2072 606" style="list-style-type: none"> <li data-bbox="974 343 1769 375">• Activity – Complete all four problems on the Daily Rigour. <li data-bbox="660 422 2072 534">• Game –Two Minute Tables https://flashmaths.co.uk/viewFlash.php?id=39 Answer as many multiplication questions as you can in two minutes. You may fill the grid in any order you wish. Can you complete the whole grid and master your times tables? <li data-bbox="873 582 1870 614">• Activity – Complete the textbook page (Exercise 1) – Understanding Ratio
 <p data-bbox="224 710 571 774">Literacy and English</p>	<p data-bbox="1254 622 1489 654"><u>NHS Superheroes</u></p> <p data-bbox="907 694 1825 774">I thought I would mix things up a bit this week, so no grammar task! Study the photograph and see if you can answer the related questions.</p>
 <p data-bbox="280 893 504 949">Spelling</p>	<p data-bbox="1209 869 1534 901"><u>Chilli Challenge Spelling</u></p> <p data-bbox="1288 909 1456 941">Rule: er or ar</p> <p data-bbox="907 949 1836 981">Activity: Choose an activity from the P7 Active Spelling Strategies sheet.</p>
 <p data-bbox="212 1053 571 1109">Other Curricular Areas</p>	<p data-bbox="1176 989 1568 1021"><u>Yearbook Personal Page Task</u></p> <p data-bbox="1008 1029 1736 1173">This task is over 2 weeks and due in on Friday 29th May. Please take your time and make sure you do not rush it. This is going in as your personal page in your book. See attached task map.</p>
 <p data-bbox="224 1220 571 1284">Health and Wellbeing</p>	<p data-bbox="1198 1189 1545 1220"><u>Keepy Uppy Challenge</u></p> <p data-bbox="683 1228 2060 1332">Your challenge this week is to see how many keepy uppies you can do without letting the ball drop. Have a few trial runs and see if you can keep beating your previous score throughout the week. What is highest score? Mine is 2 – I am sure you can beat this!</p>