



Kate and Jamie each have some money.

Altogether they have **£1.50**

Kate gives Jamie **10p** so that they both have the same amount.

How much money did each have at the start?

Show your **method**. You may get a mark.

Kate had p Jamie had p

17i
17ii
2 marks

21



The cost for using a minibus is £1.36 for each kilometre.

8 friends go on a 114 kilometre journey.

They share the cost equally.

How much does each person pay?

Show your **method**.
You may get a mark.

£

21i
21ii
2 marks

6

These are the prices in a shoe shop.



boots
£45.50



sandals
£12.75



trainers
£34.99

How much **more** do the boots cost than the trainers?



6a

1 mark

Rosie buys a pair of trainers and a pair of sandals.

How much change does she get from £50?



Show your **method**.
You may get a mark.

6bi

6bii

2 marks

8

Forest School sells badges for charity.



For each badge sold, **£1.20** is given to a charity.

How much does the charity get when **12** badges are sold?



8a
1 mark

If the charity got **£24**, how many badges were sold?



8b
1 mark

1

Write these prices in order from smallest to largest.

99p

£10.50

£0.75

£9

£2.05



smallest

largest

4

These are the prices of coconuts and bananas.



coconuts
78p each



bananas
£1.20 for 1kg

Josh buys **one coconut** and **half a kilogram** of bananas.

How much does he spend altogether?

Show your **method**.
You may get a mark.

£



Oranges cost **25p** each.


How many oranges can Josh buy for **£1.50**?

9


Cinema tickets cost **£3.65** each.
Hannah buys **4 tickets**.



How much does Hannah pay?



popcorn
£1.95



milkshake
£1.25

Nico buys a **box of popcorn** and **two milkshakes**.

How much does Nico spend **altogether**?

Show
your **method**.
You may get
a mark.

7

A shop sells candles.



plain candles
35p each



star candles
60p each



stripe candles
85p each

Sapna buys **4** star candles and **2** stripe candles.

How much does she pay **altogether**?

 Show your **working**. You may get a mark. 

3



These are the prices of sandwiches, drinks and fruit.

Sandwiches	Drinks	Fruit
cheese £1.45	milk 55p	apple 15p
tuna £1.70	cola 45p	pear 20p
salad £1.20	juice 65p	melon 25p


Shereen buys a **tuna** sandwich, **milk** and a **pear**.

How much does she pay?




Mike has 80p to spend on a **fruit** and a **drink**.

What **two** things can he buy for exactly **80p**?

 and

10

A shop sells three types of sunglasses.

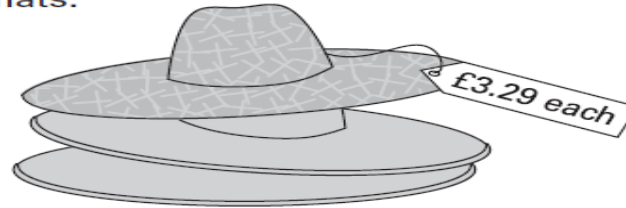


What is the **difference** in price between the **most** expensive and **least** expensive sunglasses?



£

The shop also sells sun hats.



Ryan buys the **£4.69 sunglasses** and a **sun hat**.

How much change does he get from **£10**?



Show your **working**.
You may get a mark.

9


These are the prices in a fish and chip shop.

Fish.....	£1.95
Chips small bag.....	55p
large bag.....	70p
Peas.....	38p

Luke has **£3**

He wants to buy one fish, peas and two large bags of chips.

How much **more** money does he need?

Show your **method**.
You may get a mark.



Cheddar cheese costs £7.50 for 1kg.

Marie buys 200 grams of cheddar cheese.

How much does she pay?



Cream cheese costs £3.60 for 1kg.

Robbie buys a pot of cream cheese for 90p.



How many grams of cream cheese does he buy?



Show
your **method**.
You may get
a mark.