

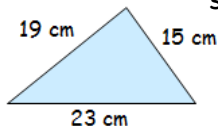
$$\begin{array}{r} 5724 \\ + 2806 \\ \hline \end{array}$$

2

Write eight hundred and sixty thousand, three hundred and fifty as a number.

3

Calculate the perimeter of this shape...

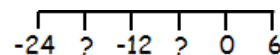


4

Round 6835 to the nearest 10...


5

Write down the missing numbers from this number line...



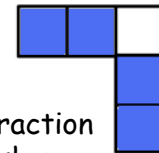
6

What is the name of this 3D object? How many faces does it have?



7




What fraction of this shape is shaded?



8

Change 187 seconds into minutes and seconds...

9

Steve has £900...  ...but has to pay:-
Mortgage Payment £310  Council Tax Due Now £120 
How much does Steve have left to spend for the month?

10

Calculate $6 + 4 \times 3$

11

Calculate $\frac{1}{8}$ of 56

12

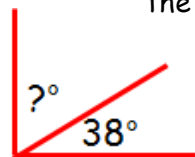
Which of these are multiples of 9?
14, 23, 36, 48, 51

13

Add the following mentally...
 $7.4 + 2.8$

14

Calculate the missing angle...



15


$$\begin{array}{r} 7625 \\ - 3986 \\ \hline \end{array}$$

16

Calculate how long it is from...
11:36 am to 12:24 pm

17

Calculate the area of the rectangle below...



18

Write 290 402 in words

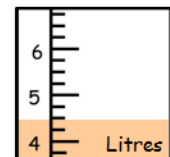
19

How many lines of symmetry does this shape have?



20

How much liquid is shown?



21

Which of these are factors of 10?
1, 3, 5, 6, 8, 10

22

Calculate 20% of 40

23

$$\begin{array}{r} 475 \\ \times 5 \\ \hline \end{array}$$

24

Solve the equation below...
 $x + 7 = 12$

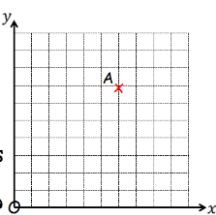
25

What is the name of this shape? How many sides does it have? How many vertices?



26

What are the coordinates of point A?



27


$$3 \overline{) 8346}$$

28

Write down the next two numbers in the sequence below
10, 13, 16, 19, ...

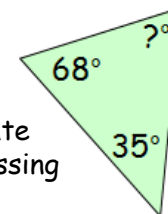
29

Calculate the surface area of this cube...



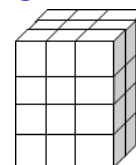
30

Calculate the missing angle...



31


Calculate the volume of the cuboid shown...



RIGOUR

by cdmasterworks Ltd

Numeracy for Learning, Life and Work



July CfE nd Level Calendar

1

#abitofmathseveryday

2	3	4	5	6	7
8	9	10	11	12	13
14	15	16	17	18	19
20	21	22	23	24	25
26	27	28	29	30	31