



$$\begin{array}{r} 1 \quad 325 \\ + 654 \\ \hline \end{array}$$

**2** Today is National ice-cream day.  
How much change would I receive from £5 if I bought three 99p cones?




**3** What number is 400 more than 800?


**4** Today is National chocolate chip cookie day.  
What 2D shape is this chocolate chip cookie?



**5** How many 10p's are there in £3.40?




**6** Write the number 6080 in words



**7** In the number 50 678 what does the 6 stand for?

**8** Write these numbers in order from the smallest to the biggest:  
30, 330, 3, 303

**9** Today is National book lovers day.  
If I read a book a week, how many books would I read in a year?



**10** 
$$\begin{array}{r} 9876 \\ - 5203 \\ \hline \\ \hline \end{array}$$

**11** Calculate  $150 \div 10$


**12** How many days are there in November?




**13** Today is National international left handers day.  
How many fingers in total are on 5 left hands?



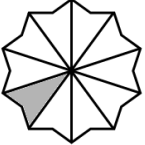
**14** Write the following in 24 hour time...



**15** Today is National relaxation day.  
If Cari goes to bed at 8 pm and has a long lie until 10 am, how many hours does she sleep?




**16** What fraction of this shape is shaded?




**17** Write the next two numbers this sequence.  
20, 17, 14, 11, ...

**18** What symbol should go in place of the star to make this calculation correct?  
 $8 \star 12 = 20$




**19** Write the 19<sup>th</sup> of August 2001 as numbers only.




**20** 
$$\begin{array}{r} 53 \\ \times 3 \\ \hline \\ \hline \end{array}$$


**21** Write the time shown here in words




**22** Today is National tooth fairy day.  
A toddler has 20 milk teeth by the time they are 3 years old. An adult has 12 teeth more than this. How teeth does an adult have?



**23** Today is National sponge cake day.  
A sponge cake is halved, and then halved again. How many slices has the sponge cake been cut into?




**24** If today is Friday, what day was it 1 week ago?




**25** 
$$\begin{array}{r} 2 \overline{) 628} \end{array}$$

**26** Today is National dog day.  
How many legs in total are there if there are 12 dogs?

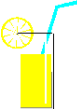


**27** What is the value of the missing number represented by the shape below?  
 $4 + \triangle = 7$




**28** ? is bigger?  
 $42 + 23$  or  $8 \times 8$   
Give a reason for your answer!

**29** Today is National lemon juice day.  
How many 200 ml glasses can be poured from 1 litre of lemon juice?



**30** Today is National beach day.  
The longest beach in Scotland, Balmedie Beach, is 14 miles. The longest beach in England, Chesil beach, is 4 miles longer. How long is Chesil beach?



**31** Is this statement true or false?  
 $0.2 < 0.09$