



Name: _____ Class: _____

Find $\frac{1}{2}$ of each number.

1 $\frac{1}{2}$ of 6 = _____

2 $\frac{1}{2}$ of 10 = _____

3 $\frac{1}{2}$ of 24 = _____

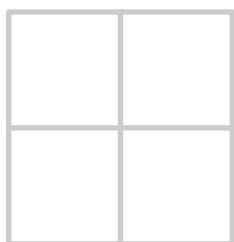
4 $\frac{1}{2}$ of 20 = _____

5 $\frac{1}{2}$ of 2 = _____

6 $\frac{1}{2}$ of 16 = _____

Shade the correct amount.


7 Shade $\frac{1}{2}$ of the square.




8 Shade $\frac{1}{2}$ of the rectangle.



9 Shade $\frac{2}{4}$ of the circle.



10 Shade $\frac{1}{2}$ of the circle.



11 Shade $\frac{2}{4}$ of the square.



12 Shade $\frac{2}{4}$ of the rectangle.

