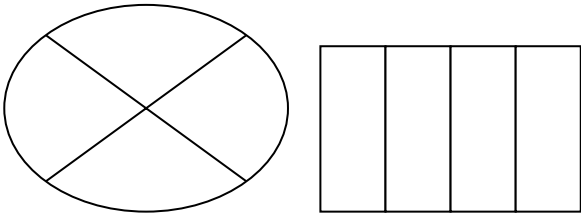


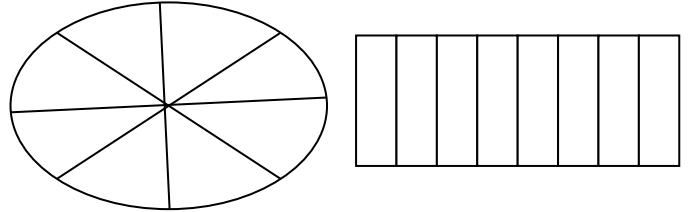
Fractions of shapes

LI: To shade different fractions of shapes.

Shade $\frac{3}{4}$ of each of the following shapes.




Shade $\frac{5}{8}$ of each of the following shapes.

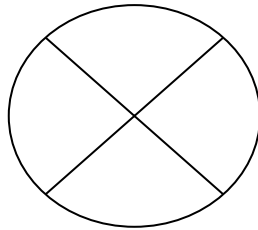


Shade the amount shown of each shape:

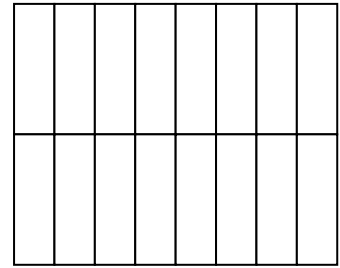
$\frac{2}{6}$



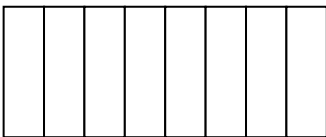
$\frac{1}{4}$




$\frac{1}{2}$



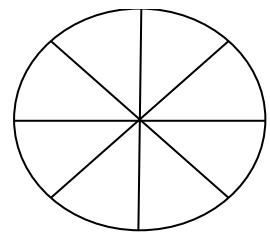
$\frac{7}{8}$



$\frac{3}{5}$



$\frac{1}{4}$



Match the fraction to the shape:

$\frac{3}{4}$

$\frac{9}{16}$

$\frac{1}{2}$

$\frac{1}{3}$

$\frac{2}{5}$

