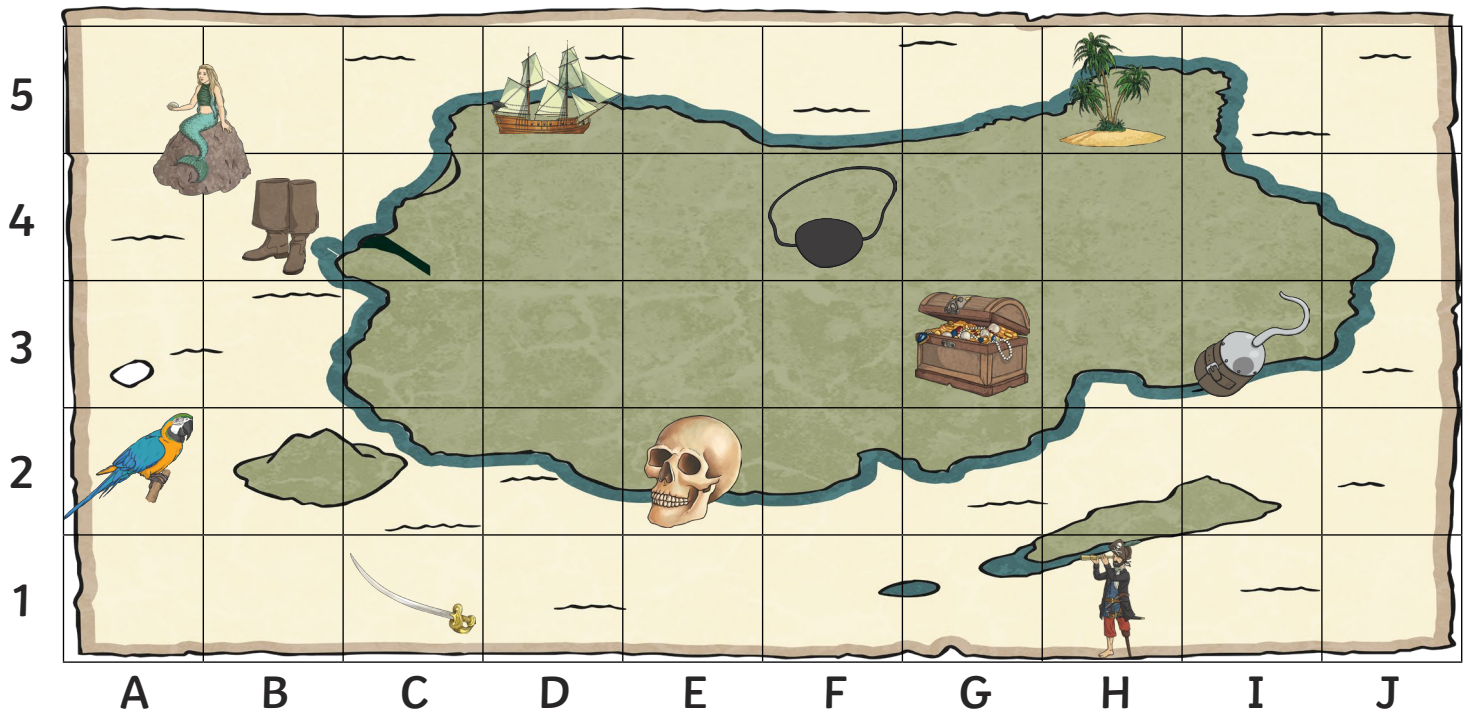


Pirate Map Grid Reference

I can read, write and plot grid references in the first quadrant.



What object is at each of these grid references on the pirate map?

(E2) = _____


(H5) = _____


(A2) = _____


(H1) = _____


(C1) = _____


Write the grid reference for each of these items on the pirate map:

 = ()

 = ()

 = ()

 = ()

 = ()

Plot the following grid references on the grid using a cross:

(G1)

(D3)

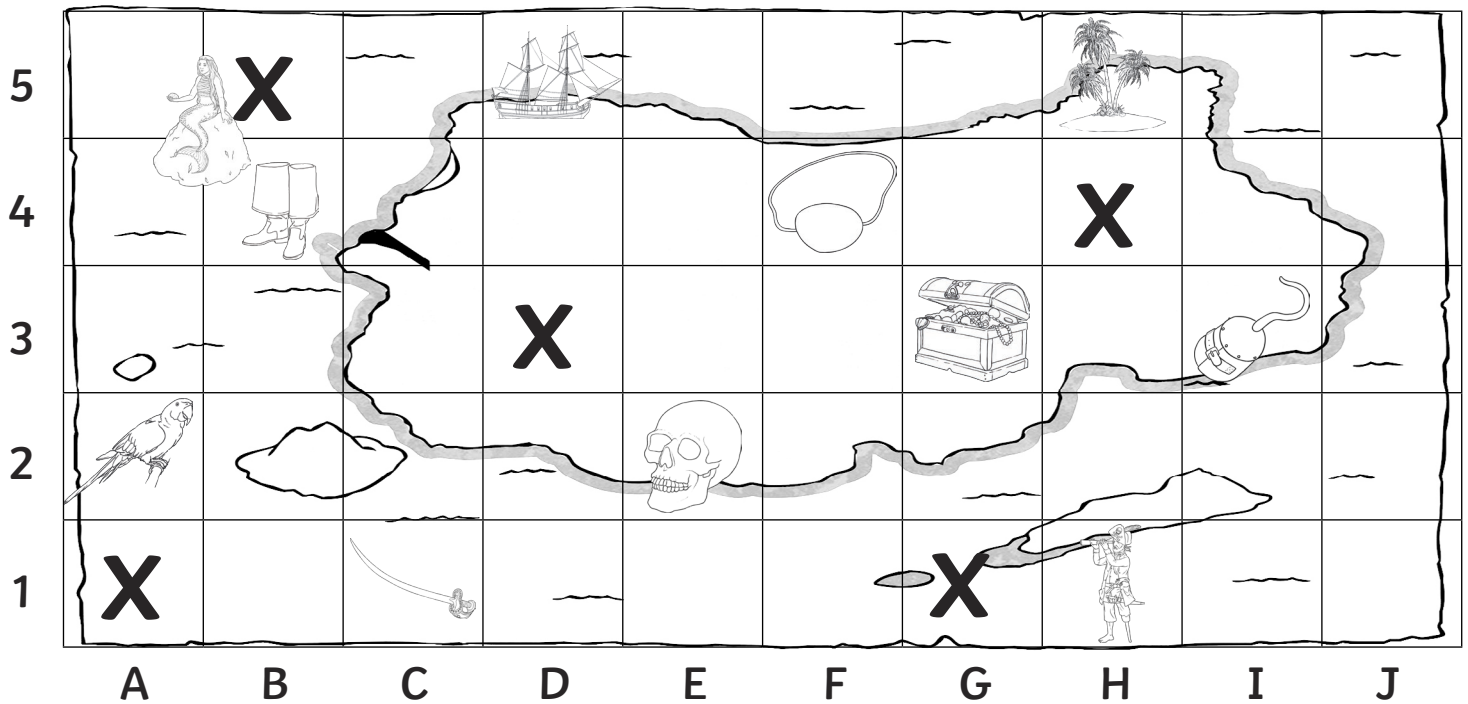
(H4)

(B5)


(A1)


Pirate Map Grid Reference - Answers


I can read, write and plot grid references in the first quad-





What object is at each of these grid references on the pirate map?

(E2) = 


(H5) = 


(A2) = 


(H1) = 


(C1) = 


Write the grid reference for each of these items on the pirate map:

 = (F 4)

 = (D 5)

 = (B 4)

 = (I 3)

 = (G 3)

Plot the following grid references on the grid using a cross:

(G1)

(D3)

(H4)

(B5)

(A1)

Pirate Map Grid Reference

I can read, write and plot grid references in the first quadrant.



What object is at each of these grid references on the pirate map?

(H4) = _____

(B2) = _____

(J5) = _____

(C7) = _____

(K1) = _____

(E3) = _____

Write the grid reference for each of these items on the pirate map:



= ()



= ()



= ()



= ()



= ()



= ()

Plot these grid references on the grid using a cross:

(C8)

(K7)

(D1)

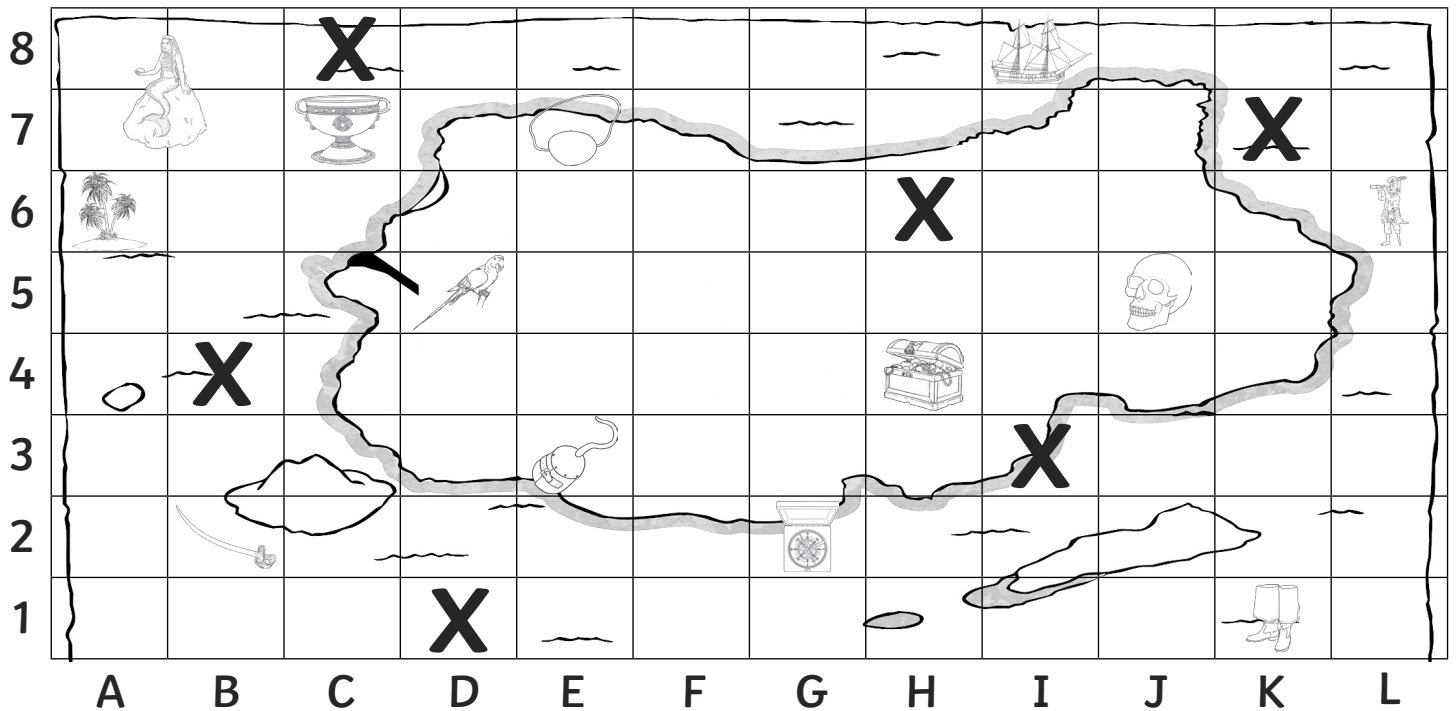
(B4)

(H6)


(I3)


Pirate Map Grid Reference - Answers


I can read, write and plot grid references in the first quad-





What object is at each of these grid references on the pirate map?


(H4) = 

(B2) = 


(J5) = 


(C7) = 


(K1) = 


(E3) = 


Write the grid reference for each of these items on the pirate map:

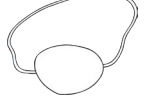
 = (L 6)

 = (A 6)

 = (G 2)

 = (I 8)

 = (D 5)

 = (E 7)

Plot these grid references on the grid using a cross:

(C8)

(K7)

(D1)

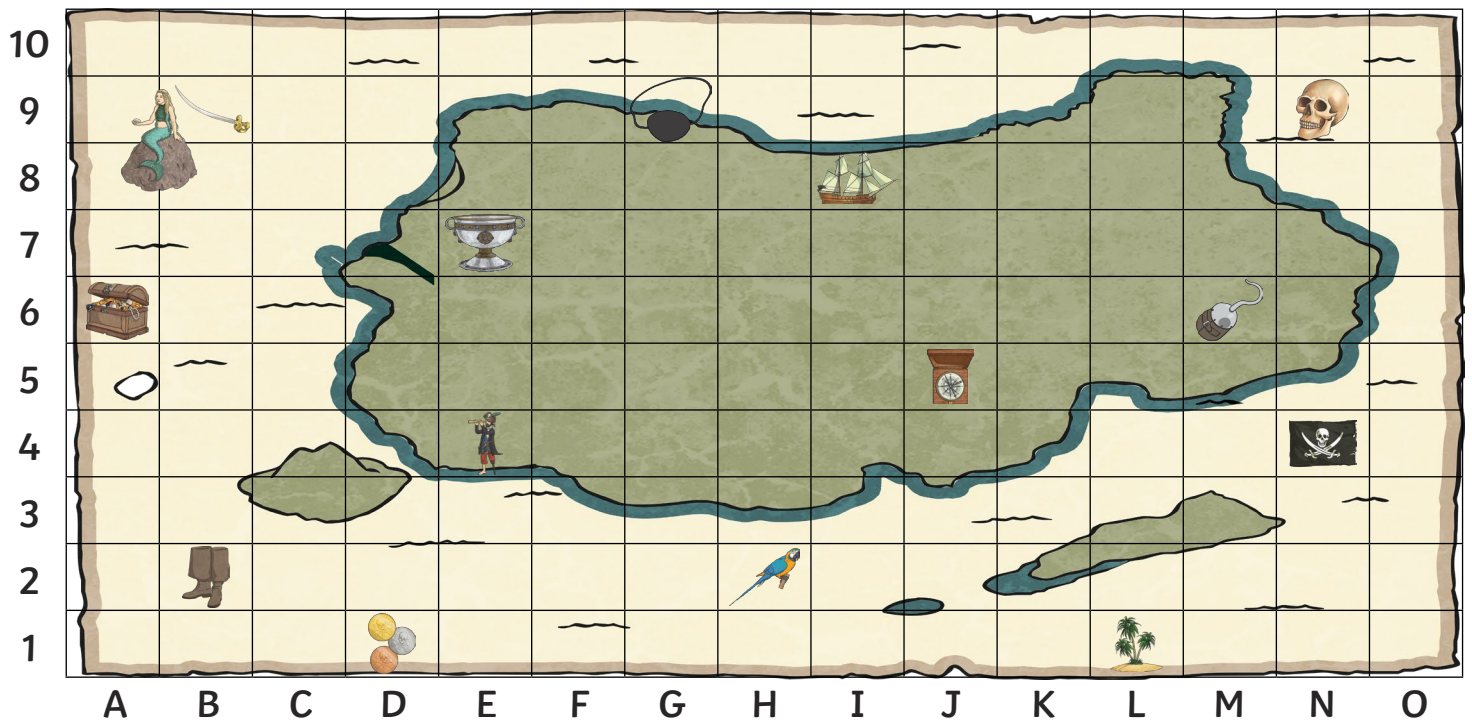
(B4)

(H6)

(I3)

Pirate Map Grid Reference

I can read, write and plot grid references in the first quadrant.



What object is at each of these grid references on the pirate map?

(H2) = _____

(M6) = _____

(B9) = _____

(N4) = _____

(A6) = _____

(J5) = _____

Write the grid reference for each of these items on the pirate map:



= ()



= ()



= ()



= ()



= ()



= ()

Plot these grid references on the grid using a cross:

(K9)

(M3)

(F1)

(A9)

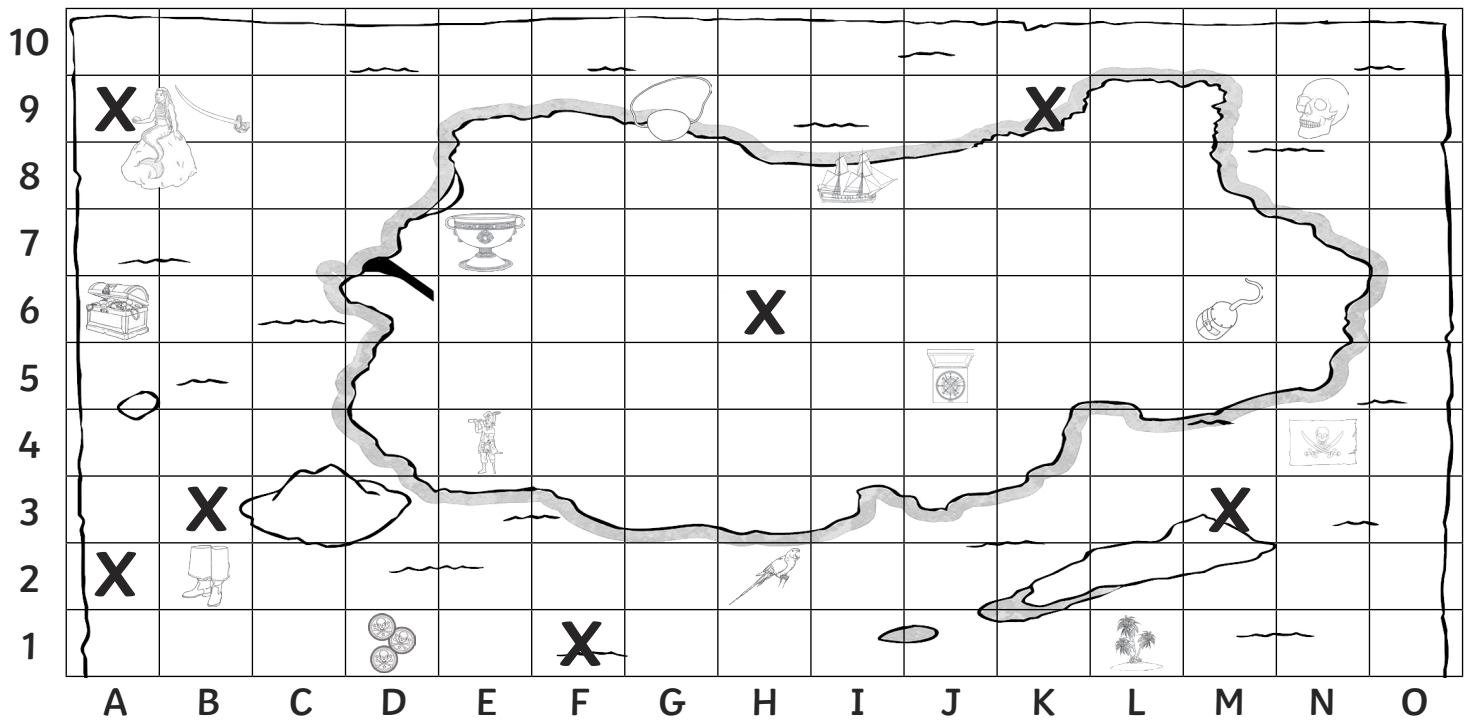
(H6)

(A2)

(B3)

Pirate Map Grid Reference - Answers

I can read, write and plot grid references in the first quadrant.

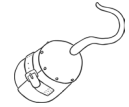


What object is at each of these grid references on the pirate map?

(H2) =



(M6) =



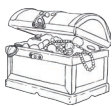
(B9) =



(N4) =



(A6) =



(J5) =



Write the grid reference for each of these items on the pirate map:



= (L 1)



= (B 2)



= (I 8)



= (D 1)



= (E 7)



= (N 9)

Plot these grid references on the grid using a cross:

(K9)

(M3)

(F1)

(A9)

(H6)

(A2)

(B3)