
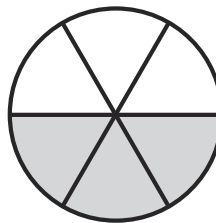

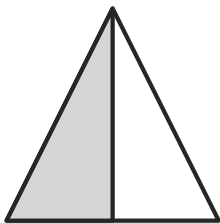



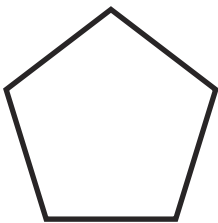


One Half

One half can be written $\frac{1}{2}$ or $\frac{2}{4}$ or $\frac{3}{6}$ or $\frac{4}{8}$

One half of each of these figures is shaded:




Colour one half of each of these shapes:




Colour one half of each of these groups of animals:


a.




b.



c.



d.



What number is half of 2? _____

What number is half of 4? _____

What number is half of 6? _____

What number is half of 8? _____



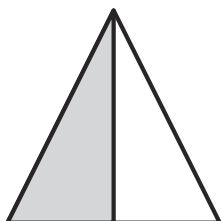
What number is half of 10? _____

What number is half of 20? _____


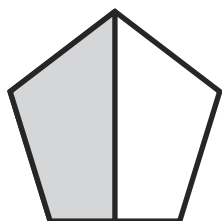
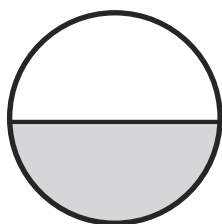
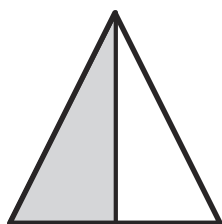
One Half Answers

One half can be written $\frac{1}{2}$ or $\frac{2}{4}$ or $\frac{3}{6}$ or $\frac{4}{8}$

One half of each of these figures is shaded:




Colour one half of each of these shapes:




Colour one half of each of these groups of animals:


a.




b.



c.



d.



What number is half of 2? **1**

What number is half of 4? **2**

What number is half of 6? **3**

What number is half of 8? **4**

What number is half of 10? **5**

What number is half of 20? **10**