

P1/2 Numeracy Resource TUESDAY

L.I: I am learning to subtract.

1. How many cupcakes are there?

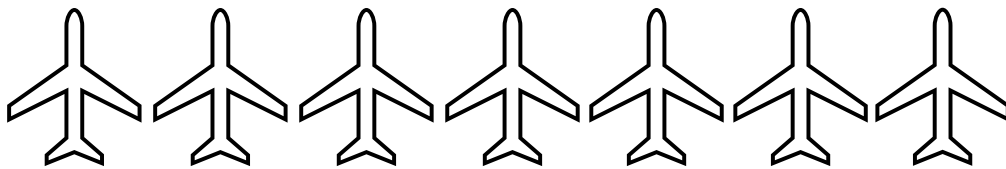


There are \_\_\_ cupcakes.

Then, Miss O'Connell eats 2 cupcakes. (Cross out the cupcakes that have been eaten to help you)

How many cupcakes are there now? \_\_\_

2. How many aeroplanes are there?




There are \_\_\_ aeroplanes.

Then 3 fly away.

How many aeroplanes are there now? \_\_\_


3. How many balls are there?



There are \_\_\_ balls.

Then, 2 are kicked away.  
Now, there are \_\_\_ balls.

4. How many insects are there?



First, there were \_\_\_ insects.  
Then, 4 flew away.  
Now, there are \_\_\_ insects left.