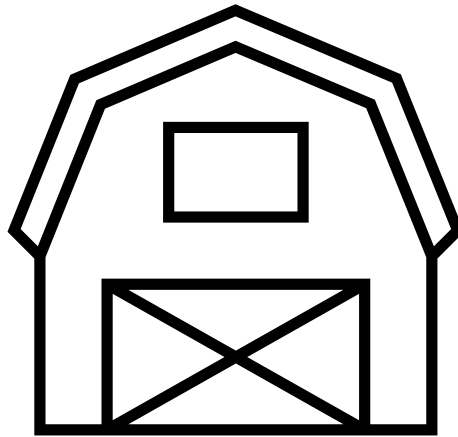


P/2 Numeracy WEDNESDAY


L.I. - I can add more, even when I can't see an amount.

1. Read this number story and solve the problem.



There are 4 horses in a barn.

Then, the farmer brings 3 more horses to the barn.




How many horses are there **now**?

$$\underline{\quad} + 3 =$$

2. There are 5 sheep hiding in the field.



Then, 5 more sheep come into the field.



How many sheep are there altogether?

$$\underline{\quad} + 5 =$$

3. Ron has blown up **some** balloons.

Then, he blows up **5 more**.

Now he has **7 balloons altogether**.

How many balloons did Ron start with?

$$\underline{\quad} + 5 = 7$$

