



P1/2 numeracy WEDNESDAY

L.I: I can recognise and make systematic number bonds.

1. Can you work out the missing number bond from this set?





$$5 + 0$$



$$4 + 1$$



$$\quad + \quad$$




$$2 + 3$$



$$1 + 4$$



$$0 + 5$$


2. Can You write down all of the number bonds for the number 6?

Remember and be systematic. I have completed the first one for you. Use toys or objects to help you.

$$0 + 6$$