

Colour the 2x tables.

25	19	3	7	20
8	22	10	21	5
2	23	6	14	24
13	15	18	1	17
12	4	16	9	11

Complete:

a  $1 \times 2 = \underline{\hspace{2cm}}$

g  $7 \times 2 = \underline{\hspace{2cm}}$

b  $2 \times 2 = \underline{\hspace{2cm}}$

h  $8 \times 2 = \underline{\hspace{2cm}}$

c  $3 \times 2 = \underline{\hspace{2cm}}$

i  $9 \times 2 = \underline{\hspace{2cm}}$

d  $4 \times 2 = \underline{\hspace{2cm}}$

j  $10 \times 2 = \underline{\hspace{2cm}}$

e  $5 \times 2 = \underline{\hspace{2cm}}$

k  $11 \times 2 = \underline{\hspace{2cm}}$


f  $6 \times 2 = \underline{\hspace{2cm}}$

l  $12 \times 2 = \underline{\hspace{2cm}}$

How many cherries are there in total?

a   $3 \times 2 = \underline{\hspace{2cm}}$

d   $5 \times 2 = \underline{\hspace{2cm}}$

b   $1 \times 2 = \underline{\hspace{2cm}}$

e   $4 \times 2 = \underline{\hspace{2cm}}$

c   $6 \times 2 = \underline{\hspace{2cm}}$

f   $2 \times 2 = \underline{\hspace{2cm}}$

# 2x tables



Colour the 2x tables.

1	2	3	4	5
6	7	8	9	10
11	12	13	14	15
16	17	18	19	20
21	22	23	24	25

Complete:

a  $12 \times 2 = \underline{\hspace{2cm}}$

b  $2 \times 2 = \underline{\hspace{2cm}}$

c  $\underline{\hspace{2cm}} \times \underline{\hspace{2cm}} = 14$

d  $5 \times 2 = \underline{\hspace{2cm}}$

e  $\underline{\hspace{2cm}} \times \underline{\hspace{2cm}} = 6$

f  $8 \times 2 = \underline{\hspace{2cm}}$

g  $\underline{\hspace{2cm}} \times \underline{\hspace{2cm}} = 18$

h  $10 \times 2 = \underline{\hspace{2cm}}$

i  $4 \times 2 = \underline{\hspace{2cm}}$


j  $6 \times 2 = \underline{\hspace{2cm}}$


k  $\underline{\hspace{2cm}} \times \underline{\hspace{2cm}} = 2$

l  $11 \times 2 = \underline{\hspace{2cm}}$

How many cherries are there in total?

a  three x two =  $\underline{\hspace{2cm}}$

d  five x two =  $\underline{\hspace{2cm}}$

b   $1 \times 2 = \underline{\hspace{2cm}}$

e   $4 \times 2 = \underline{\hspace{2cm}}$

c   $6 \times 2 = \underline{\hspace{2cm}}$

f   $2 \times 2 = \underline{\hspace{2cm}}$

Colour the 2x tables.

25	19	3	7	20
8	22	10	21	5
2	23	6	14	24
13	15	18	1	17
12	4	16	9	11

Complete:

a  $12 \times 2 = \underline{\hspace{2cm}}$

g  $\underline{\hspace{2cm}} \times \underline{\hspace{2cm}} = 18$

b  $2 \times 2 = \underline{\hspace{2cm}}$

h  $10 \times 2 = \underline{\hspace{2cm}}$

c  $\underline{\hspace{2cm}} \times \underline{\hspace{2cm}} = 14$

i  $4 \times 2 = \underline{\hspace{2cm}}$

d  $5 \times 2 = \underline{\hspace{2cm}}$

j  $6 \times 2 = \underline{\hspace{2cm}}$


e  $\underline{\hspace{2cm}} \times \underline{\hspace{2cm}} = 6$

k  $\underline{\hspace{2cm}} \times \underline{\hspace{2cm}} = 2$


f  $8 \times 2 = \underline{\hspace{2cm}}$

l  $11 \times 2 = \underline{\hspace{2cm}}$

How many cherries are there in total?


a   $\underline{\hspace{2cm}} \times \underline{\hspace{2cm}} = \underline{\hspace{2cm}}$

d   $\underline{\hspace{2cm}} \times \underline{\hspace{2cm}} = \underline{\hspace{2cm}}$

b   $\underline{\hspace{2cm}} \times \underline{\hspace{2cm}} = \underline{\hspace{2cm}}$

e   $\underline{\hspace{2cm}} \times \underline{\hspace{2cm}} = \underline{\hspace{2cm}}$

c   $\underline{\hspace{2cm}} \times \underline{\hspace{2cm}} = \underline{\hspace{2cm}}$

f   $\underline{\hspace{2cm}} \times \underline{\hspace{2cm}} = \underline{\hspace{2cm}}$

# Answers - 2x tables



Colour the 2x tables.

1	2	3	4	5
6	7	8	9	10
11	12	13	14	15
16	17	18	19	20
21	22	23	24	25

Complete:

a  $1 \times 2 = \underline{2}$

b  $2 \times 2 = \underline{4}$

c  $3 \times 2 = \underline{6}$

d  $4 \times 2 = \underline{8}$

e  $5 \times 2 = \underline{10}$

f  $6 \times 2 = \underline{12}$

g  $7 \times 2 = \underline{14}$

h  $8 \times 2 = \underline{16}$

i  $9 \times 2 = \underline{18}$


j  $10 \times 2 = \underline{20}$

k  $11 \times 2 = \underline{22}$


l  $12 \times 2 = \underline{24}$

How many cherries are there in total?

a   $3 \times 2 = \underline{6}$

b   $1 \times 2 = \underline{2}$

c   $6 \times 2 = \underline{12}$

d   $5 \times 2 = \underline{10}$

e   $4 \times 2 = \underline{8}$

f   $2 \times 2 = \underline{4}$

Colour the 2x tables.

1	2	3	4	5
6	7	8	9	10
11	12	13	14	15
16	17	18	19	20
21	22	23	24	25

Complete:

a  $12 \times 2 = \underline{24}$

g  $\underline{9} \times \underline{2} = 18$

b  $2 \times 2 = \underline{4}$

h  $10 \times 2 = \underline{20}$

c  $\underline{7} \times \underline{2} = 14$

i  $4 \times 2 = \underline{8}$

d  $5 \times 2 = \underline{10}$

j  $6 \times 2 = \underline{12}$

e  $\underline{3} \times \underline{2} = 6$

k  $\underline{1} \times \underline{2} = 2$


f  $8 \times 2 = \underline{16}$

l  $11 \times 2 = \underline{22}$

How many cherries are there in total?

a  three x two = six

d  five x two = ten

b  1 x 2 = 2

e  4 x 2 = 8

c  6 x 2 = 12

f  2 x 2 = 4

Colour the 2x tables.

25	19	3	7	20
8	22	10	21	5
2	23	6	14	24
13	15	18	1	17
12	4	16	9	11

Complete:

a  $12 \times 2 = \underline{24}$

g  $\underline{9} \times \underline{2} = 18$

b  $2 \times 2 = \underline{4}$

h  $10 \times 2 = \underline{20}$

c  $\underline{7} \times \underline{2} = 14$

i  $4 \times 2 = \underline{8}$

d  $5 \times 2 = \underline{10}$

j  $6 \times 2 = \underline{12}$


e  $\underline{3} \times \underline{2} = 6$

k  $\underline{1} \times \underline{2} = 2$

f  $8 \times 2 = \underline{16}$

l  $11 \times 2 = \underline{22}$

How many cherries are there in total?

a   $3 \times 2 = 6$

d   $5 \times 2 = 10$

b   $1 \times 2 = 2$

e   $4 \times 2 = 8$

c   $6 \times 2 = 12$

f   $2 \times 2 = 4$