


Make doubles

Select a task card.

Represent the double on the ladybird and complete the sentence.



Double _____ is _____.

Task cards

Double 5

Double 3

Double 7

Double 9

Double 4

Double 1






Double 10

Double 6

Double 2

Double 8

Lady bird spots



Stem sentences

Double _____ is _____.

Double _____ is _____.

Double _____ is _____.

Double _____ is _____.

Double _____ is _____.

Double _____ is _____.

Double _____ is _____.

Double _____ is _____.

Double _____ is _____.

Double _____ is _____.

Double _____ is _____.

Double _____ is _____.

Double _____ is _____.

Double _____ is _____.

Double _____ is _____.

Double _____ is _____.

Double _____ is _____.

Double _____ is _____.

Double _____ is _____.

Double _____ is _____.

Double _____ is _____.

Double _____ is _____.

Double _____ is _____.

Double _____ is _____.

Double _____ is _____.

Double _____ is _____.

Double _____ is _____.

Double _____ is _____.

Double _____ is _____.

Double _____ is _____.

Double _____ is _____.

Double _____ is _____.

Double _____ is _____.

Double _____ is _____.

Double _____ is _____.

Double _____ is _____.

Double _____ is _____.

Double _____ is _____.

Double _____ is _____.

Double _____ is _____.

Double ? is 18

Double ? is 6

Double ? is 12

Double ? is 8

Double ? is 4

Double ? is 16

Double ? is 14

Double ? is 20

Double ? is 10

Double ? is 2

Answers - Task cards

| | |
|----------------|---------------|
| Double 5 = 10 | Double 3 = 6 |
| Double 7 = 14 | Double 9 = 18 |
| Double 4 = 8 | Double 1 = 2 |
| Double 10 = 20 | Double 6 = 12 |
| Double 2 = 4 | Double 8 = 16 |

Answers - What number am I?

| | |
|----------------|-----------------|
| Double 9 is 18 | Double 3 is 6 |
| Double 6 is 12 | Double 4 is 8 |
| Double 2 is 4 | Double 8 is 16 |
| Double 7 is 14 | Double 10 is 20 |
| Double 5 is 10 | Double 1 is 2 |