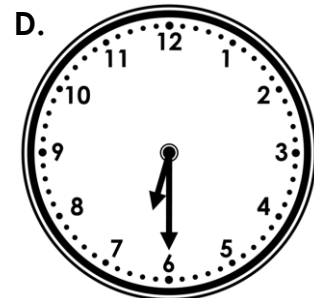
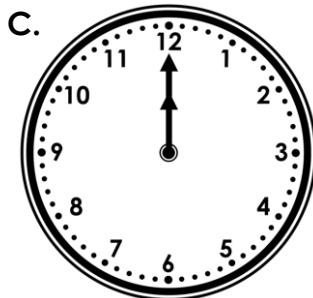
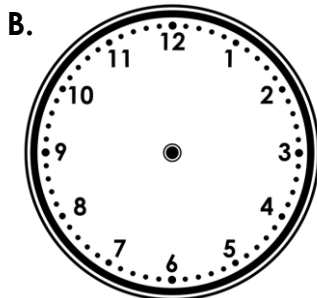
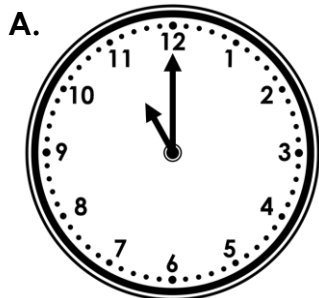


O'clock and Half Past

4. Draw a line from each clock face to the correct time written to find the odd one out. Draw the hands on the blank clock to show the correct time for the odd one out.



12 o'clock

Half past 6

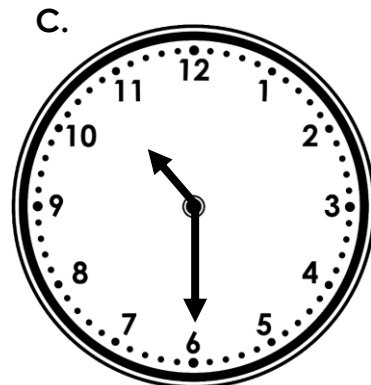

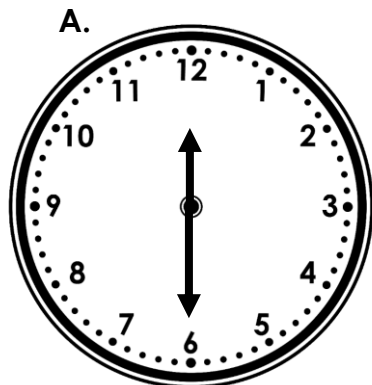
11 o'clock

Half past 2



VF
HW/Ext

5. True or false? All of the clocks below show half past the hour.




VF
HW/Ext

6. Work out what time Terri is thinking of.



The hour hand is pointing to the 9.
The minute hand is pointing to the 6.
What time am I thinking of?



RPS
HW/Ext