


5

16

Write four fact family number sentences using the number bond..




$$\begin{array}{rcl} _ + _ & = & _ \\ _ + _ & = & _ \\ _ - _ & = & _ \\ _ - _ & = & _ \end{array}$$

Addition and Subtraction to 20

6

11

Write four fact family number sentences using the number bond.




$$\begin{array}{rcl} _ + _ & = & _ \\ _ + _ & = & _ \\ _ - _ & = & _ \\ _ - _ & = & _ \end{array}$$

Addition and Subtraction to 20

7

13

Write four fact family number sentences using the number bond.




$$\begin{array}{rcl} _ + _ & = & _ \\ _ + _ & = & _ \\ _ - _ & = & _ \\ _ - _ & = & _ \end{array}$$

Addition and Subtraction to 20

8

15

Write four fact family number sentences using the number bond.



$$\begin{array}{rcl} _ + _ & = & _ \\ _ + _ & = & _ \\ _ - _ & = & _ \\ _ - _ & = & _ \end{array}$$

Addition and Subtraction to 20