


1

18

Write four fact family number sentences using the number bond.




$$\begin{array}{rcl} _ + _ & = & _ \\ _ + _ & = & _ \\ _ - _ & = & _ \\ _ - _ & = & _ \end{array}$$

Addition and Subtraction to 20

2

14

Write four fact family number sentences using the number bond.




$$\begin{array}{rcl} _ + _ & = & _ \\ _ + _ & = & _ \\ _ - _ & = & _ \\ _ - _ & = & _ \end{array}$$

Addition and Subtraction to 20

3

19

Write four fact family number sentences using the number bond.




$$\begin{array}{rcl} _ + _ & = & _ \\ _ + _ & = & _ \\ _ - _ & = & _ \\ _ - _ & = & _ \end{array}$$

Addition and Subtraction to 20

4

12

Write four fact family number sentences using the number bond.
You will have sentences repeated.



$$\begin{array}{rcl} _ + _ & = & _ \\ _ + _ & = & _ \\ _ - _ & = & _ \\ _ - _ & = & _ \end{array}$$

Addition and Subtraction to 20