

Chapter 3



Exercise 1

1. How many 1p pieces will you get for :-

a



b



c



2. How many 5p pieces will you get for :-

a



b



c



3. How many 10p pieces will you get for :-

a



b



c



4. You can pay for each of the following using only two coins. Which 2 coins ?

a a notebook priced 12p

b a bag of rolls costing 60p.

5. How many £1 coins will you get for :-

a 200p

b 700p

c 1000p ?

6. How many pence are there in £9 ?

7. Change the following to pounds and pence - (example :- 310p = £3 and 10p).

a 185p

b 207p

c 1050p.

Exercise 2



1. Write the following as **pounds (£'s)** (example :- 3 pounds and 68p = £3.68).

a 2 pounds and 95p.

b 5 pounds and 6p

c 34p.

2. **COPY** and complete :-

a
$$\begin{array}{r} \pounds 0.24 \\ + \pounds 0.43 \\ \hline \end{array}$$

b
$$\begin{array}{r} \pounds 0.96 \\ + \pounds 0.87 \\ \hline \end{array}$$

c
$$\begin{array}{r} \pounds 1.20 \\ + \pounds 1.90 \\ \hline \end{array}$$

d
$$\begin{array}{r} \pounds 3.50 \\ + \pounds 4.29 \\ \hline \end{array}$$

e
$$\begin{array}{r} \pounds 4.35 \\ + \pounds 2.65 \\ \hline \end{array}$$

f
$$\begin{array}{r} \pounds 1.07 \\ + \pounds 6.68 \\ \hline \end{array}$$

g
$$\begin{array}{r} \pounds 0.65 \\ - \pounds 0.25 \\ \hline \end{array}$$

h
$$\begin{array}{r} \pounds 1.00 \\ - \pounds 0.55 \\ \hline \end{array}$$

i
$$\begin{array}{r} \pounds 4.00 \\ - \pounds 1.95 \\ \hline \end{array}$$

j
$$\begin{array}{r} \pounds 1.40 \\ - \pounds 0.56 \\ \hline \end{array}$$

k
$$\begin{array}{r} \pounds 7.81 \\ - \pounds 4.38 \\ \hline \end{array}$$

l
$$\begin{array}{r} \pounds 10.07 \\ - \pounds 8.94 \\ \hline \end{array}$$

3. James bought a pen for 39p and paid for it with a 50p coin.
How much change did James get ?




4. Jemma paid £1.60 for a hot-dog and 75p for french fries.

a How much did the hot-dog and fries cost altogether ?

b What change did Jemma get from a £2 and a £1 coin ?



5.  Ben handed over a £5 note to pay for his entry into the zoo.
He was handed a 50p coin, a 20p coin and a 10p coin as change.


a How much did his change come to ?

b What did it cost Ben to get into the zoo ?

6. Mrs Grace paid £8.85 for her family to go ice-skating.

a How much change did she get from a £10 note ?

b Write down the fewest number of coins she could be given as her change.



Exercise 3



1. Set down each bill and work out the total cost of these items :-

a

carrots	80p
potatoes	£1.60
cabbage	£1.15
leek	45p
	£ _____

b

mandarins	70p
melon	£1.15
cherries	£1.25
grapes	£1.85
	£ _____



2. Nick's mum bought a scarf.

It was reduced in a sale by £7.99.

The price of the scarf **before** the sale was £12.55.

What did Nick's mum pay for it in the sale ?



3.



Nick's dad bought a shirt and tie set in the sale for £11.75.

It had been **reduced** by £8.75.

What was the price of the shirt and tie set **before** the sale started ?


4. Lucy's dad gave her a £5 note and three £1 coins.

She bought a lipstick for £5.74 and a hair band for £1.99.

How much money was Lucy then left with ?



5.



Donny bought the following :-

- a tidy for £1.36
- scissors for 85p
- a maths set for £3.47 and
- a calculator for £3.99.

How much change did Donny get from two £5 notes ?

Revision Exercise



1. How many 1p pieces will you get for :-



2. How many 5p pieces will you get for :-



3. How many 10p pieces will you get for :-



4. You can pay for an ice-lolly, priced at 27 pence, using exactly **three coins**. Which three coins ?

5. How many **pence** are there in £7 ?

6. 310p can be written as £3 and 10p. Write 475p in the same way.

7. **COPY** and complete :-

a £2.50
 + £5.27

b £2.00
 - £0.77


c £10.03
 - £6.98

8. Gerry paid £1.35 for a burger and 85p for a side salad.

- a How much altogether did the burger and salad cost ?
- b What change did Gerry get from £3 ?

9. Nick's dad bought a pipe which was reduced in a sale by £1.55. The price of the pipe **before** the sale was £7.35.

What did Nick's dad pay for the pipe in the sale ?



10.



Nick's sister bought a blouse in a sale. It had been reduced by £5.50.

What was the price of the blouse before the sale started ?