

Chapter 1



Exercise 1

1. What does the 3 stand for in each of these numbers :-

- a 3704 b 8732 c 5163 d 394 ?

2. Write out the following numbers fully in words :-

- a 26 b 407 c 8647 d 3008.

3. Write the following numbers using digits :-

- a seven hundred and eighty. b nine thousand two hundred.
c three thousand and forty one. d four thousand and three.

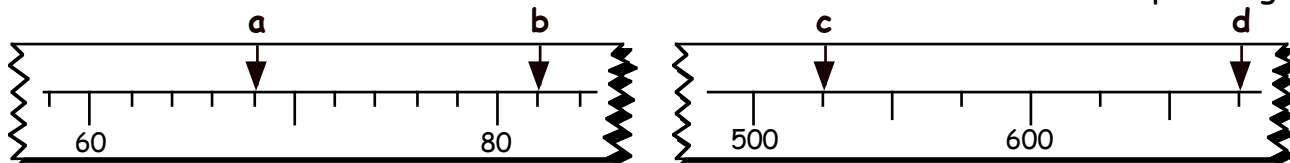
4. Put the following list of numbers in order, (LARGEST first) :-

569, 601, 587, 600, 614, 577, 568, 611, 593.

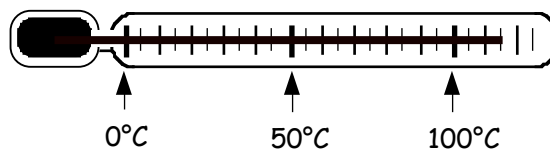
5. What number comes :-

- a 40 after 280 b 500 before 2700 c 1000 before 3050 ?

6. Look at these scales shown below. To what numbers are the arrows pointing ?



7. What is the temperature on the thermometer ?



Exercise 2



1. COPY and complete each calculation :-

- a
$$\begin{array}{r} 59 \\ + 7 \\ \hline \end{array}$$
 b
$$\begin{array}{r} 45 \\ + 8 \\ \hline \end{array}$$
 c
$$\begin{array}{r} 580 \\ + 60 \\ \hline \end{array}$$
 d
$$\begin{array}{r} 80 \\ 70 \\ + 560 \\ \hline \end{array}$$

2. Find the answers to these :-

a $45 + 7$ b $250 + 800$ c $490 + 50 + 60$ d $40 + 370 + 90$

e
$$\begin{array}{r} 68 \\ - 7 \\ \hline \end{array}$$
 f
$$\begin{array}{r} 46 \\ - 9 \\ \hline \end{array}$$
 g
$$\begin{array}{r} 330 \\ - 8 \\ \hline \end{array}$$
 h
$$\begin{array}{r} 710 \\ - 60 \\ \hline \end{array}$$


i $80 - 9$ j $410 - 70$ k $840 - 70$ l $900 - 90$

3. Bob paid £120 for his flight to Amsterdam.

Mandy only paid £90 for her flight.

a How much **altogether** did Bob and Mandy pay for their journeys ?

b How much dearer was Bob's flight ?



4. An empty tray weighs 180 grams.


A pack of pens weighs 20 grams.

What is the total weight of :-

a the tray and 1 pack of pens ?

b the tray and 2 packs of pens ?

c the tray and 3 packs of pens ?



5. My school is 940 metres from my house.

I was walking to school one day when I realised I still had my slippers on.

I was 870 metres from the school.

How far had I walked with my slippers on ?

6. Find the missing values each time, shown by a ● .

a
$$\begin{array}{r} 4 \bullet \\ + 7 \\ \hline 55 \end{array}$$

b
$$\begin{array}{r} 9 \bullet \\ - 8 \\ \hline 85 \end{array}$$

c
$$\begin{array}{r} 3 \bullet 0 \\ + 80 \\ \hline 400 \end{array}$$

d
$$\begin{array}{r} 840 \\ - \bullet 0 \\ \hline 750 \end{array}$$

Revision Exercise



1. What does the 7 stand for in each of these numbers :-

- a 7193 b 2479 c 1247 d 706 ?

2. Write out the number 3872 fully in words.

3. Write the number five thousand and ninety seven using digits.

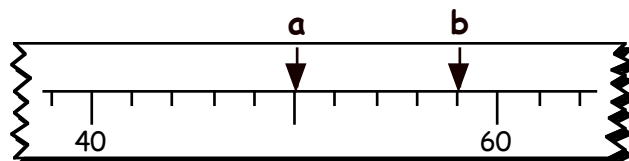
4. Put the following list of numbers in order, (SMALLEST first) :-

358, 402, 394, 400, 412, 375, 369, 416, 398.

5. What number comes :-

- a 60 after 590
b 500 before 6400 ?

6. What numbers are the arrows pointing to ?



7. **COPY** and complete each calculation :-

- a
$$\begin{array}{r} 390 \\ + 60 \\ \hline \end{array}$$
 b
$$\begin{array}{r} 320 \\ - 7 \\ \hline \end{array}$$
 c $250 + 720$ d $510 - 80$

8. Cindy paid £130 for her games console.

Danny only paid £80 for his.

- a How much altogether did Cindy and Danny pay for their consoles ?
b How much cheaper was Danny's console ?

9. It is 240 miles from Abersworth to Penrow going through the village of Burnhouse.

If the journey from Abersworth to Burnhouse is 185 miles, how far on is it to Penrow ?

