


This tray of 18 chocolates is to be split equally between Brenda and Liam.

Each of them is to get **half** of the chocolates.

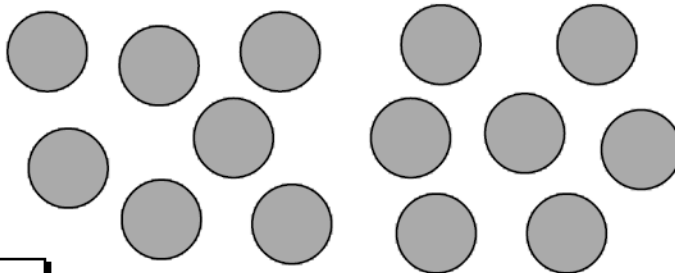


a Draw round the chocolates to show how Brenda and Liam can get **half** each.

b How many chocolates will Brenda get ?

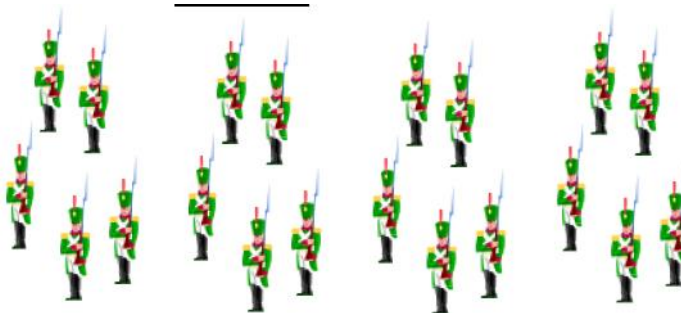
David has 14 counters.

a Draw **round** some of the counters to show how David could share them equally with his friend Tom.



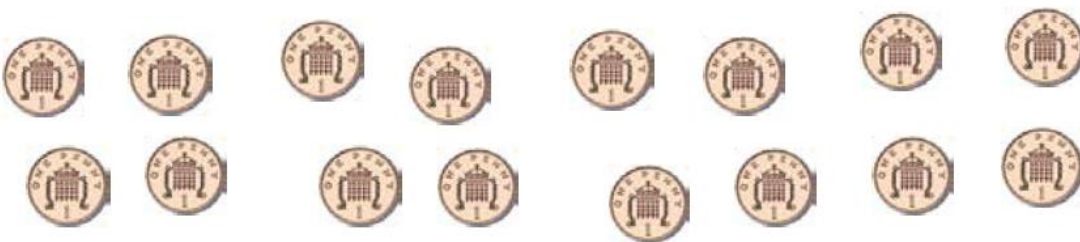
b How many counters will each boy get ?

a Billy, Tim, Ian and Robert each want a **quarter** of the 20 toy soldiers to play with.
Draw round the soldiers to show how each boy can get a **quarter** of them.



b How many soldiers does each boy get ?

a Draw round these sixteen 1p coins to show how to share them equally among the 4 children, Lucy, Nick, Jane and Neil so that each gets a **quarter**.



b How many 1p coins does each child get ?