



Set down these questions as division sums and work them out.


3. Mr Davis bought a **£258** sofa and paid it up over **3** months.
How much was each monthly payment ?



4.  The total number of runs scored in **2** cricket matches was **578**.
If the same number of runs were scored in each match, how many was that ?


5. Terry and June took **5** hours to travel **345** miles.
At the same speed, how far would they have gone in 1 hour ?



6.  Geraldine is paid **£936** for **4** weeks work.
What does she get paid for 1 week's work ?


7. **465** bags of gritting salt was loaded equally onto **2** lorries.
How many were in each lorry and how many were left out ?



8.  It took a worm **3** hours to go **534 cm** across ground.
How far did it go in 1 hour ?

9. A **500 ml** carton of orange juice was poured into **4** identical glasses.
How many **ml** did each glass hold ?



10.  A supermarket took in **£990** from the sale of **£10** boxes of dark chocolates.
How many boxes did they sell ?

11. A shopkeeper has put **5** apples into each of **24** bags.
Charlie buys all the apples.
He gives **4** apples to each of his mates.
How many classmates does Charlie have ?

