

## Tenths on a number line

Fill in the fractions on the number line. Use the bars to help you.

The Numerical Skills in First Level English Book or PPM Assessment Book on Level 2019



I can count in tenths and record this on a number line



## Wholes and tenths

Write the fractions in numbers and words.

1.  $\frac{6}{10}$  shaded one and six tenths

2. \_\_\_\_\_ shaded

3. \_\_\_\_\_ shaded

4. \_\_\_\_\_ shaded

The Numerical Skills in First Level English Book or PPM Assessment Book on Level 2019

Colour the shapes in to show the fraction.

5.  $2 \frac{7}{10}$

6.  $3 \frac{4}{10}$

7.  $3 \frac{1}{10}$

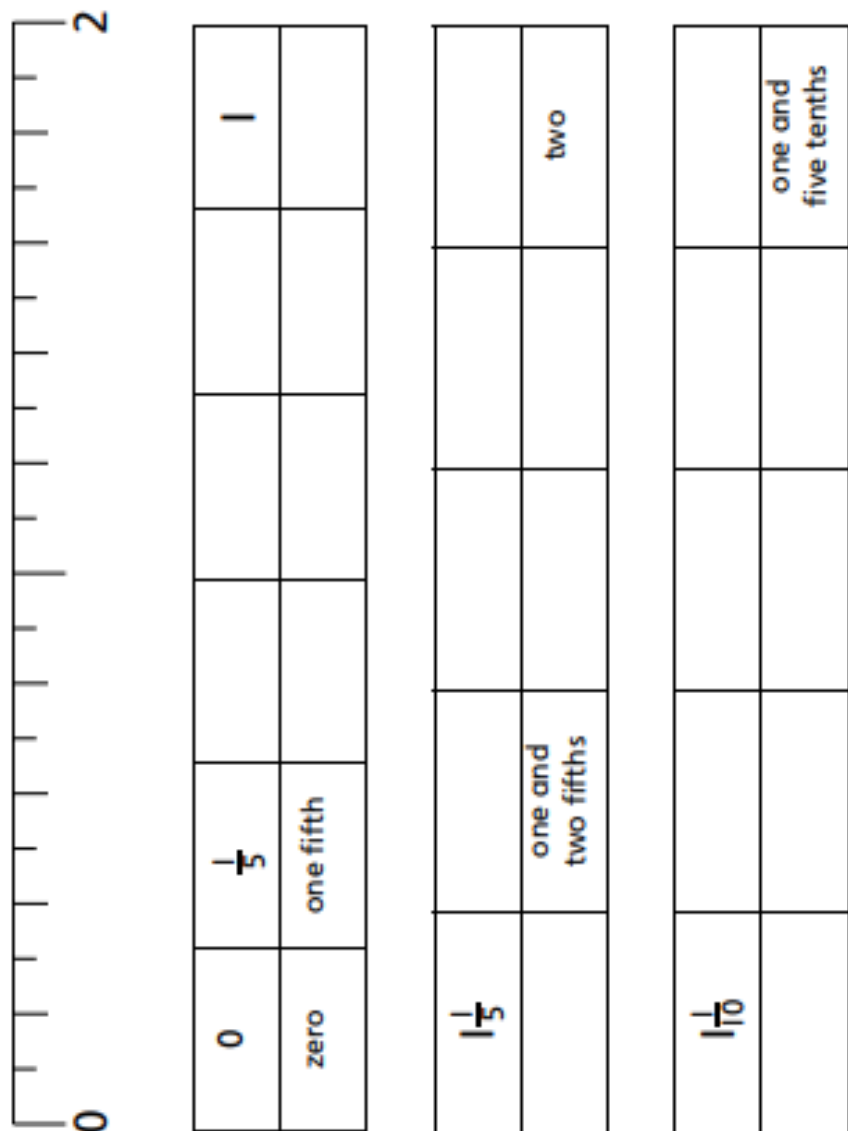


I can write tenths in words and numbers



## Fifths on a number line

Fill in the number line. Complete the table, writing the fractions in digits and in words.



The Numerals and Fractions First Level (English) Student PP160 Assessment Booklet for Level 2018

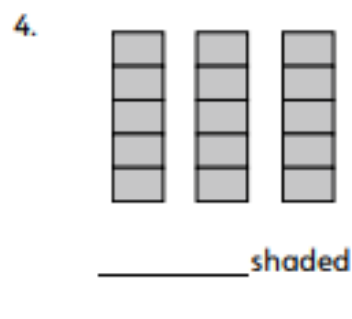
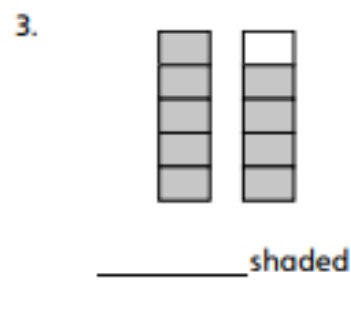
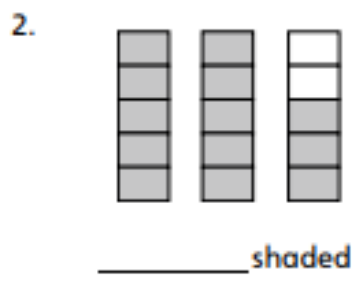
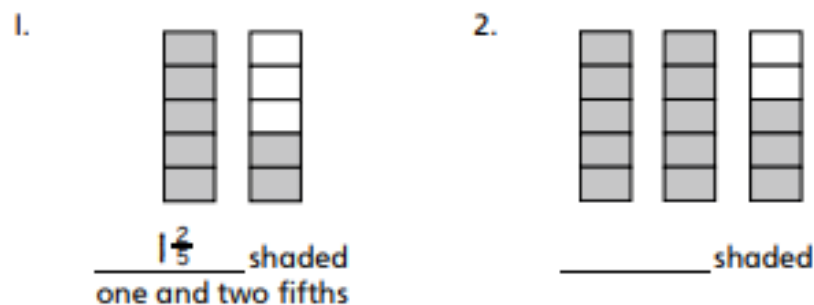


I can count in fifths and record this on a number line



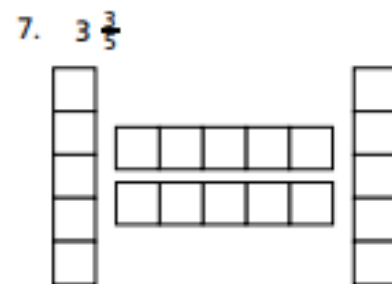
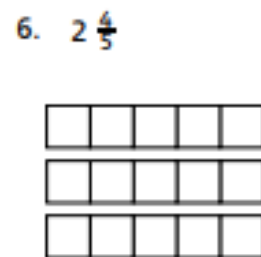
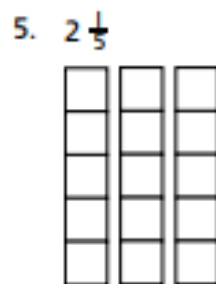
## Wholes and fifths

Write the fractions in numbers and words.



The Numerals and Fractions First Level (English) Student PP160 Assessment Booklet for Level 2018

Colour the shapes in to show the fraction.



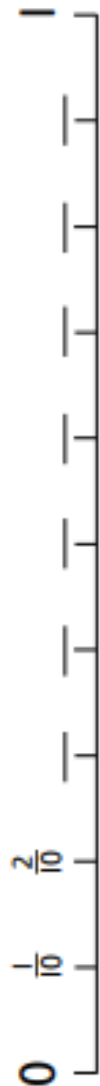
I can write fifths in words and numbers



## Fifths and tenths

Complete the number line of tenths. Complete the number line of fifths. Write in the fifths and the tenths. What do you notice?

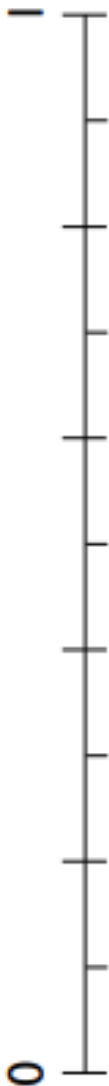
1.



2.



3.



Mathematics Grade 1st Level English/Arabic/PPM © Pearson Education Inc/2018



I can count in fifths and tenths and record this on a number line

