


# The 3 A's

## Revisit - Review - Revise


1. 0530 can be written as "half past five in the morning".

Write these times **in words** :-

a



b



2. Write the time shown on this clock in **am/pm** notation.


3. Write the times shown below as **24 hour times** :-

a 8.17 pm

b twenty to five in the morning

c 11.29 pm

d seven minutes to nine at night.



home from school

4. Write these as **12 hour times** :-

a 0245

b 1709

c 2157.

5. Here are the times of two wine & dine cruises down the west coast of Scotland.

	Ullapool	Mallaig	Fort William	Oban	Greenock	Ayr	Stranraer
Early dep.	0845	1134	1520	1725	1958	2112	2245
Late dep.	1330	1619	2105				

a How long does it take from Mallaig to Oban ?

b How long does the Early sail take ?

c Assuming both sails take the same time, at what time would the Late sail pass Ayr ?



6. A timetable for a special Senior Citizens Minibus is shown.

a When the Minibus leaves Erskine at 09.10, at what time does it arrive at Wemyss Bay ?

b The Minibus arrives at Wemyss Bay at 22.25.

Where did it set out from and when did it leave ?

c I am at the bus stop in Langbank at 6.15 pm.

How long do I have to wait for the next Wemyss Bay bus to come along ?

d How long does the journey take from :-

(i) Erskine to Langbank

(ii) Erskine to Greenock

(iii) Langbank to Greenock

(iv) Erskine to Wemyss Bay ?

Erskine		Langbank		Greenock		Wemyss Bay	
Arrive	Depart	Arrive	Depart	Arrive	Depart	Arrive	Depart
	09.10	09.28	09.30	09.54	09.56	10.25	10.27
12.05	12.10	12.28	12.30	12.54	12.56	13.25	13.27
14.05	15.10	15.28	15.30	15.54	15.56	16.25	16.27
16.05	18.10	18.28	----	----	----	----	----
----	----	----	21.30	21.54	21.56	22.25	----

