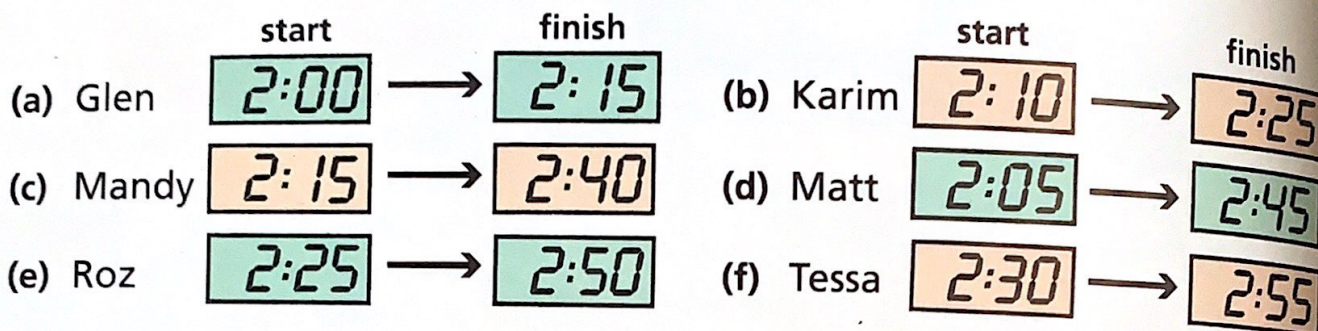



- 1 The gang visit the gym first.
How many minutes does each person spend in the gym?



They agree to meet in the Badminton Hall at 3.00 pm.
At 2.25 Karim works out that there are
35 minutes until 3.00 pm.



- 2 How many minutes are there from each time until 3.00 pm?



Roz
2.50



Glen
2.15




Mandy
2.40



Matt
2.45


Tessa starts playing at 3.50 pm. She stops playing at 4.15 pm.



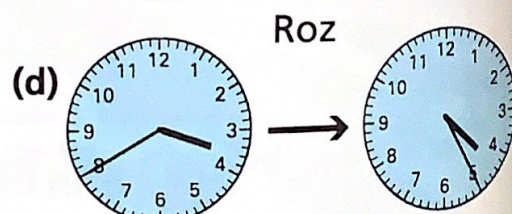
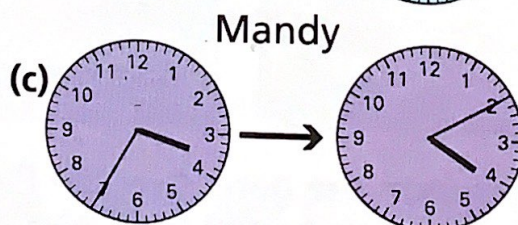
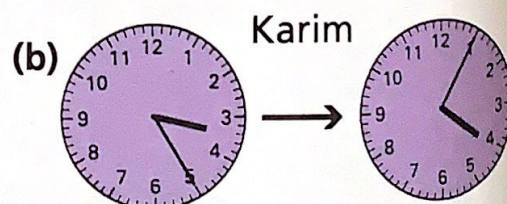
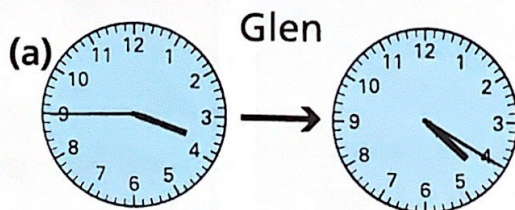
← From 3.50 to 4.00 is 10 minutes.

From 4.00 to 4.15 is 15 minutes. →

Tessa plays for **25 minutes**.



- 3 For how many minutes does each person play?



(e) Matt: 3.55 to 4.35

(f) Matt's friend: 3.50 to 4.40

Computer games

The gang plan to play computer games at Glen's house.




If we start at 4.30pm and play for 2 hours
4.30 ... 5.30 ... 6.30
we will finish at 6.30pm.



1 Find the finishing times.


	start at	play for
(a)	5pm	3 hours
(b)	11am	2 hours
(c)	2.30pm	1 hour
(d)	10.30am	3 hours

	start at	play for
(e)	12.15pm	1 hour
(f)	3.45pm	2 hours
(g)	11.20am	3 hours
(h)	6.40pm	2 hours




The computer game *Treasure* has a time limit.
The screen blanks out after 15 minutes' play.

Mandy starts at 4.40pm.
The screen blanks out at 4.55pm.



2 When does the screen blank out for these players?

	starts at	starts at
(a) Karim	3.30pm	(b) Roz 10.35am
(c) Glen	6.05pm	(d) Tessa 12.45pm




Glen and Mandy are playing *Star-trooper*.
They start at 5.30pm and play for 45 minutes.

← 5.30pm and 30 minutes is 6.00pm.

6.00pm and 15 minutes is 6.15pm. →

They finish at 6.15pm.



3 Find the finishing times for each person for each game.

(a) Karim

(b) Roz

	starts at	plays for		starts at	plays for
<i>Star-trooper</i>	4.45pm	20 minutes		11.15am	55 minutes
<i>Lost Princess</i>	5.20pm	50 minutes		2.35pm	30 minutes
<i>Jungle Drum</i>	9.50am	25 minutes		12.25pm	45 minutes