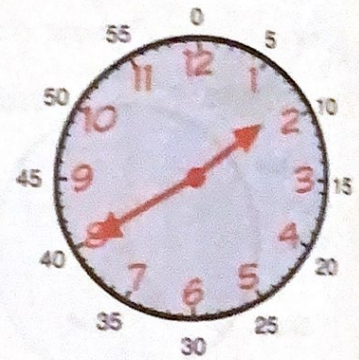


The 3 A's


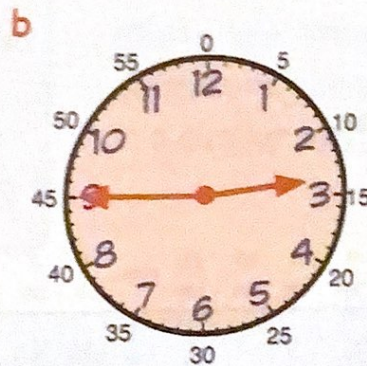
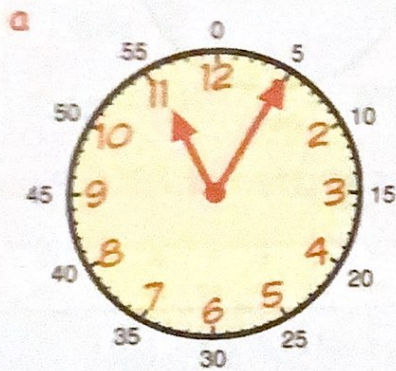
Revisit - Review - Revise

1. The time on this clock can be written as

1.40 or twenty to two




Write each of these times in 2 ways.




2. Write these digital clock times using words :-



3. Write each time below in 12 hour form using **am** or **pm** :-



Sunday breakfast



supper- time



get up for school

4. Shown below is part of a bus timetable.

Aberdeen	→	Dundee	→	Edinburgh	→	Glasgow	→	Ayr
9.55 am		11.05 am			2.10 pm	

a At what time did the bus leave Aberdeen?
(Answer in words).



b The bus arrived in Edinburgh at five minutes to noon.
Write this time using am/pm.

c The bus took 50 minutes to get from Glasgow to Ayr.
At what time did the bus arrive in Ayr?

5. Stan looks at part of a TV Times Guide.

CHANNEL 2

Sport is on at **twenty five past three in the afternoon.**

3:05	News
3:25	Sport
3:50	Game Show
4:15	Film
5:25	Soap
5:50	Evening News

a Write out these times in
the same way :-

(i) Game Show

(ii) Soap

b Which programme starts at ten to six?



6. Change each of these times to **24 hour** form :-

a 5 am

b 1 pm

c 8 pm.

d 10 am

e 11 pm

f 3.30 pm.

7. Change each of these times to **12 hour** form :-

a 0200

b 1600

c 2100.

d 1100

e 2100

f 1630.

