


Revision of Time

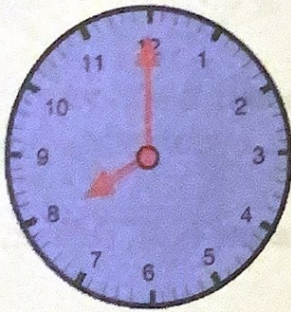


- What day is 2 days **after** Monday ?
 - What day is 3 days **before** Sunday ?
 - What is the month just **after** September ?
 - What month is 2 months **before** June ?
 - Name the **5th** month of the year.
 - What time is it 4 hours **after** quarter to eleven in the morning ?




- Write the time shown on each clock :-


a



b

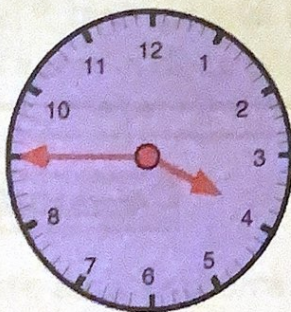


c



- Write the time on each clock **in 2 ways** :-
(*Example - quarter to 7 or 6:45 pm*)

a




morning

b



afternoon

c



evening

- I arrived in Glasgow Central at four o'clock in the afternoon after a 5 hour train journey from Mallaig.

When must the train have left Mallaig ?

