

# Lots of time

Time: mixed examples

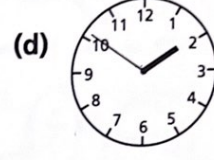
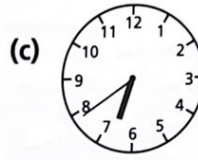
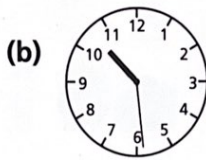
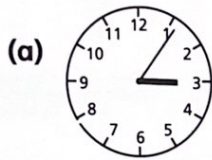
Heinemann Mathematics 4  
Textbook, page 72

28



1 Jon's clock is 15 minutes fast.  
What is the correct time?

2 Write these times. Use **just before** or **just after**.



3 (a) Write in words when each programme started.


News

Start With Us

Good Morning


Sea Tales

Home Time



9:05

8:10



(b) Write these morning programmes in order, starting with the earliest.

4 These TV programmes start  
10 minutes later than shown.  
List the new starting times.

Home Town

6:35

News

7:00

Post Bag

7:10

Masterclass

7:40

Music Box

8:30

- 5 (a) Who was early?  
(b) Who was late?  
(c) David Mills' appointment  
is 15 minutes after  
Mr Khan's. What time  
is this?  
(d) The dentist arrived  
20 minutes before  
Mrs Brown did. When did he arrive?

