

Gifts

Multiplication: HTU by 2 to 10

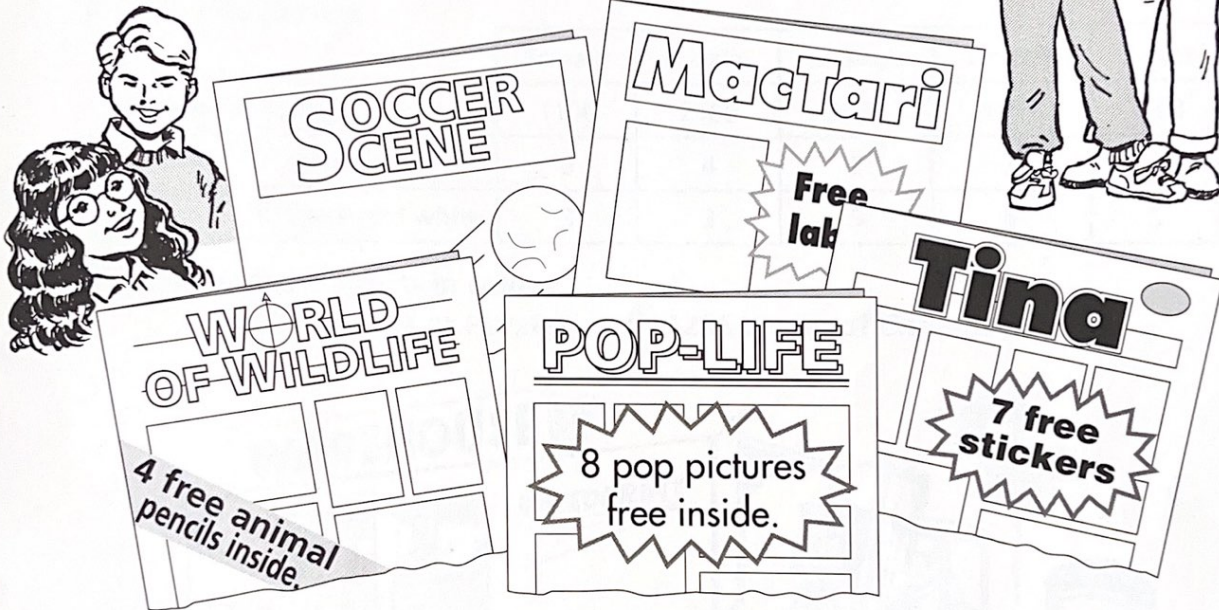
Heinemann Mathematics 5
Textbook page 22




8

- 1 Six joke cards are given free in this week's *Laugh-in!* How many joke cards are in
- (a) 143 copies (b) 217 copies
(c) 310 copies (d) 258 copies?



These comics also contain free gifts.



- 2  How many animal pencils are in
(a) 143 copies (b) 257 copies (c) 179 copies?
- 3  How many pop pictures are in
(a) 196 copies (b) 180 copies (c) 209 copies?
- 4  How many stickers are in
(a) 207 copies (b) 450 copies (c) 386 copies?
- 5 This week *Soccer Scene* has 9 free football badges.
How many badges are in
(a) 152 copies (b) 263 copies (c) 518 copies (d) 768 copies?
- 6 This week's *MacTari* contains 10 free computer labels.
How many labels are in
(a) 183 copies (b) 497 copies (c) 560 copies (d) 900 copies?

1 Find the number of sheets

- in colour
- in black and white

in these copies of *Upbeat*:

(a) 2120 (b) 1203 (c) 2214

We print 2 sheets in colour and 4 sheets in black and white in each copy of *Upbeat*.




2 Find the total number of sheets in colour and in black and white in each of these magazines.

	<i>Scream</i>	<i>Puzzles</i>	<i>Champs</i>	<i>Monster</i>	<i>Soaps</i>	
Number of copies	1106	2169	1078	1197	1168	
Number of sheets	in colour	5	4	3	2	3
	in black and white	3	3	5	5	5

3 Which has more sheets in colour:

1033 copies of *Puzzles* or 1295 copies of *Champs*?



After the magazines are printed we send them to warehouses.

4 A batch of 1265 copies of *Galaxy* is sent to each of 6 warehouses. How many copies are sent altogether?

5 Find the total number of copies of these magazines sent to warehouses.

	<i>Cool</i>	<i>Galaxy</i>	<i>Charts</i>	<i>Donna</i>	<i>Stars</i>
Number of copies to each warehouse	1336	1259	1184	1246	1052
Number of warehouses	7	7	8	8	9