




Monday 2nd June- P4-5 - Homework

Numeracy

Calculate the volume of these shapes.

1)


2)


3)


Volume: ____ cubes

Volume: ____ cubes

Volume: ____ cubes

4)


5)


6)


Volume: ____ cubes

Volume: ____ cubes

Volume: ____ cubes

7)

8)

9)

Volume: ____ cubes

Volume: ____ cubes

Volume: ____ cubes

Sumdog

Child specific multiplication target

‘j’ sound as in ‘jam’

Spelling Words

judge jungle
jury bridge
age gerbil
danger jersey
angel jerk

Giglets

Sumdog - spelling j challenge
- volume challenge

J	Z	M	J	B	J	X	O	H	X
O	U	P	O	U	U	J	O	I	N
B	L	I	K	J	I	B	M	C	L
R	T	J	E	U	C	Z	S	V	A
J	O	U	R	N	E	Y	S	G	C
E	D	D	H	G	J	J	U	F	H
G	T	G	D	L	U	V	Q	Y	S
Q	F	E	T	E	M	D	Y	K	M
E	T	I	E	W	P	D	N	X	D
Y	U	V	U	J	D	Q	K	U	O

JOB
JOKE

JUICE
JUDGE

JOURNEY
JUMP

JOIN
JUNGLE