


Monday 26th May- P4-5 - Homework

Numeracy


Calculate the area of these shape using your knowledge of 2D shapes:

1




Area = \_\_\_\_\_

2




Area = \_\_\_\_\_

3



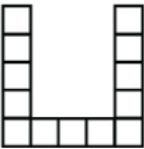
Area = \_\_\_\_\_

4



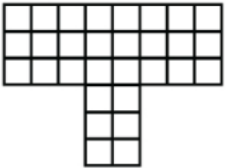
Area = \_\_\_\_\_

5



Area = \_\_\_\_\_


6



Area = \_\_\_\_\_

Find the perimeter of each shape

1 in



1 in

Sumdog

Child specific multiplication target

‘ck’ sound as in ‘cat’

Spelling Words

- |          |           |
|----------|-----------|
| trick    | coping    |
| schooner | courtyard |
| crafting | hacking   |
| cocoa    | licking   |
| Crete    | cabbage   |

Giglets

Sumdog - spelling ck challenge  
- perimeter challenge

ck

i	g	v	h	d	s	o	c	k	s	k	k
h	l	i	x	f	r	p	l	u	c	k	c
c	h	i	c	k	e	n	l	o	k	v	a
w	d	i	h	k	l	y	n	p	f	e	y
s	h	o	c	k	i	k	q	g	l	q	y
r	f	l	p	v	t	l	u	p	i	w	i
j	o	o	n	j	o	r	o	t	c	l	r
y	d	c	f	u	q	u	i	c	k	l	y
f	r	k	k	l	z	o	b	c	a	n	x
x	h	q	s	q	o	q	z	h	k	b	l
h	h	c	p	e	a	c	o	c	k	e	x
r	n	b	q	e	z	e	k	c	e	b	d



quickly

peacock

socks

lock



shock

chicken

knock

rock



flock

tricked

flick

pluck