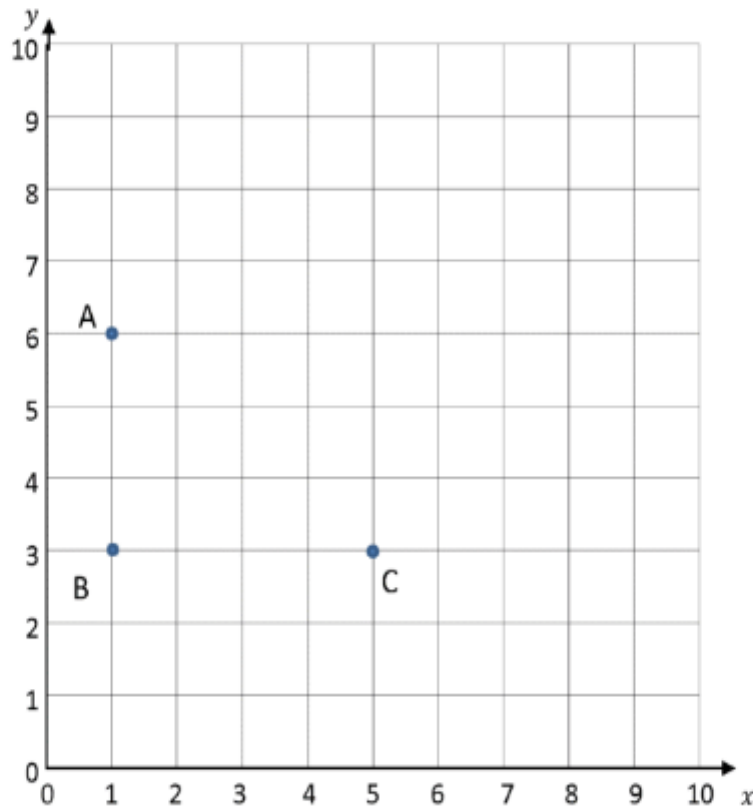




PLOT THE COORDINATES SHEET 1



1) What are the coordinates of points A, B and C?

A (__, __) B (__, __) C (__, __)

2) Plot point D so that the four points make a rectangle.

3) What are the coordinates of point D? (__, __)

4) On the same coordinate grid, plot these coordinates:

E (7,6) F (7,8) G (9,8) H (9,6)

5) Join the coordinates together. What shape do they make? _____

CHALLENGE

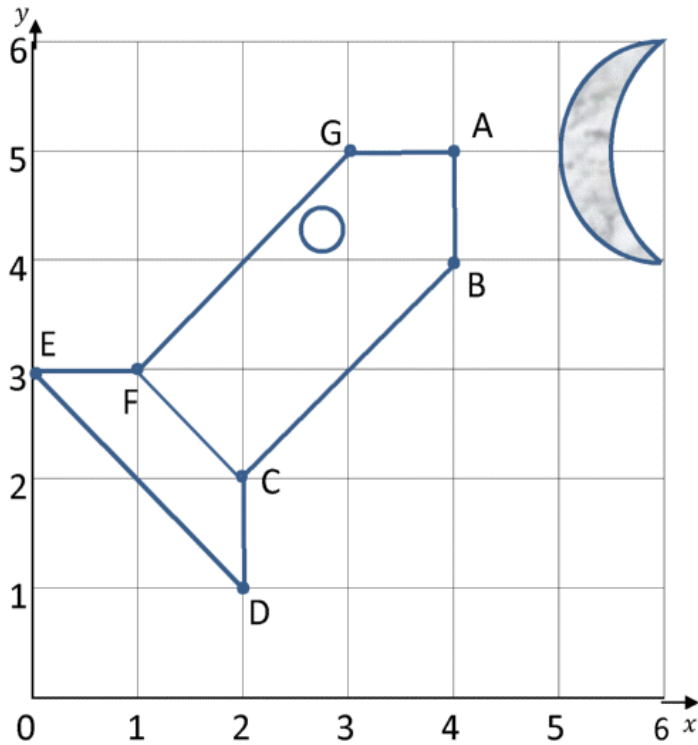
Draw an isosceles triangle on the grid and write down the 3 coordinates you used.

Name _____

Date _____



PLOT THE COORDINATES SHEET 3



1) Write down the coordinates of this rocket.

A (__, __)

B (__, __)

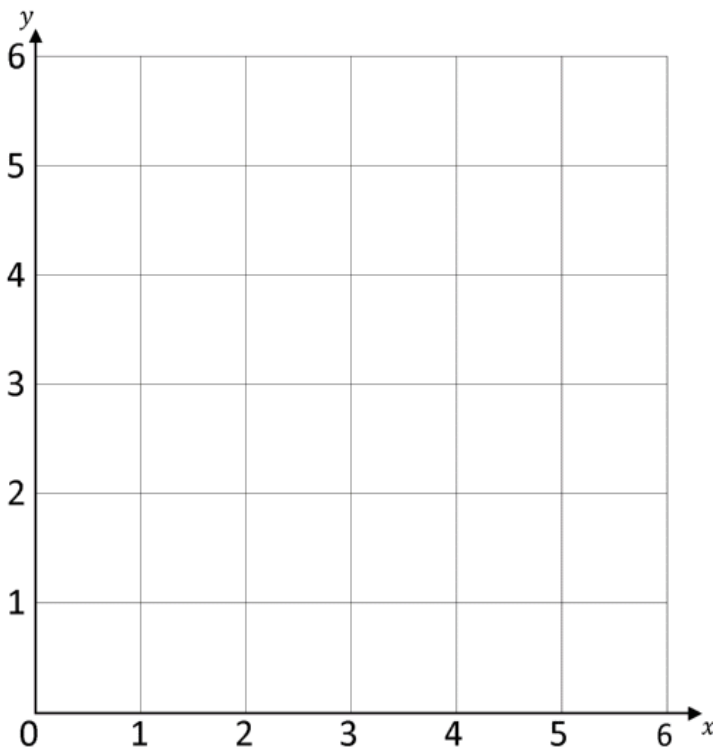
C (__, __)

D (__, __)

E (__, __)

F (__, __)

G (__, __)



2) Draw your own rocket in the grid below and write down the coordinates.