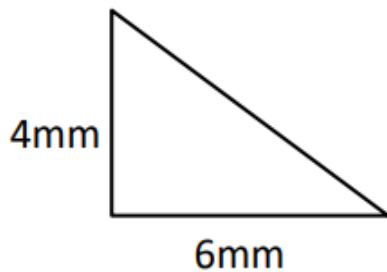


Work out the area of the following right-angle triangles.

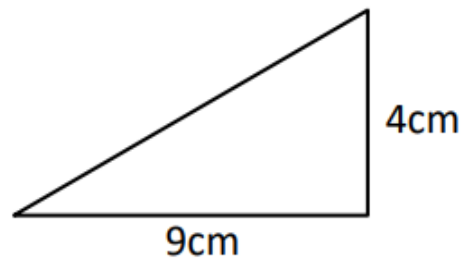
They are **not** drawn to scale.

1)



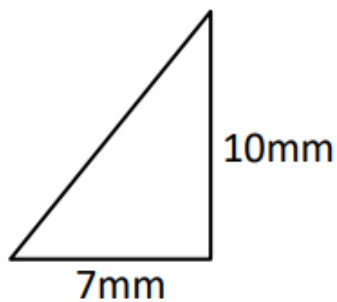
Area = \_\_\_\_\_ mm<sup>2</sup>

2)



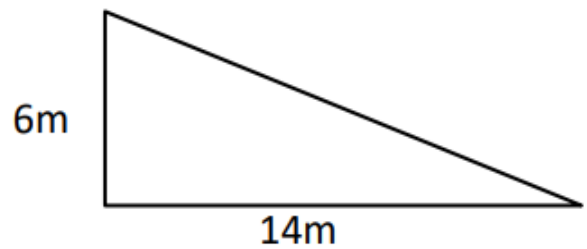
Area = \_\_\_\_\_ cm<sup>2</sup>

3)



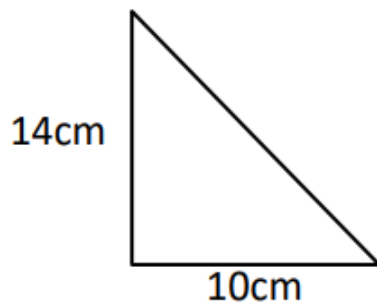
Area = \_\_\_\_\_ mm<sup>2</sup>

4)



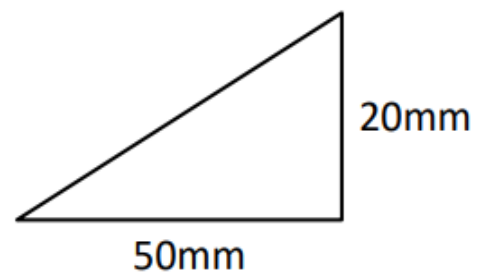
Area = \_\_\_\_\_ m<sup>2</sup>

5)



Area = \_\_\_\_\_ cm<sup>2</sup>

6)



Area = \_\_\_\_\_ mm<sup>2</sup>

Handy hint:

*The formula for the area of a triangle is  $\frac{1}{2} \times \text{base} \times (\text{perpendicular}) \text{ height}$*