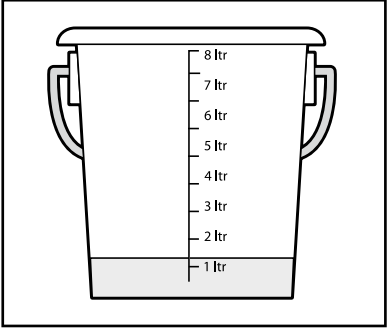
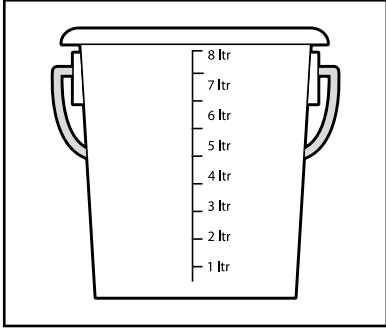
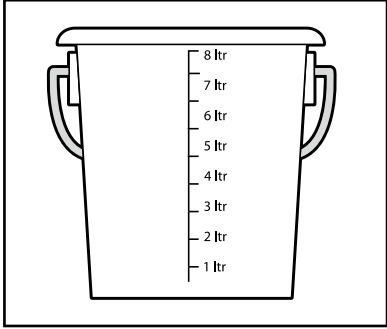
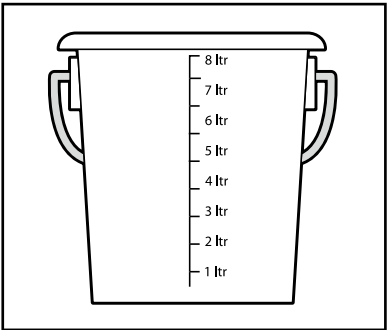
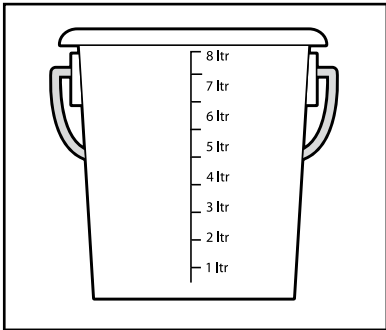
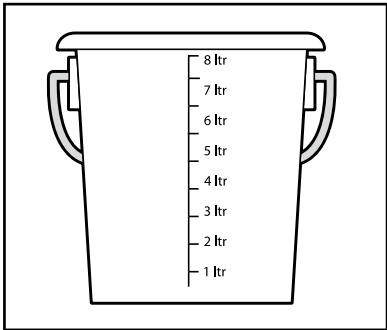
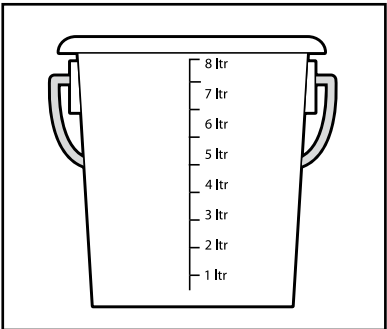
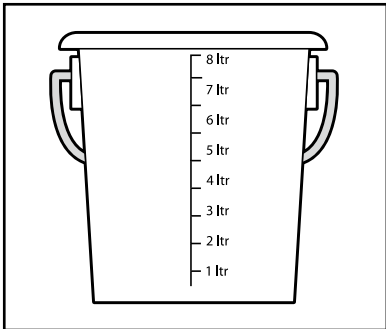
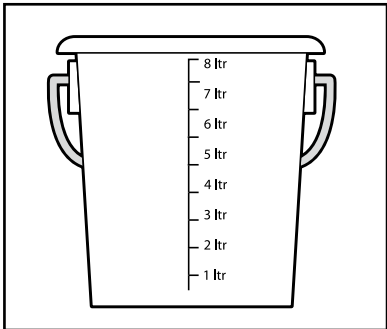


# Scales

Colour to show the amount of water in each bucket.

|   |   |   |
|---|---|---|
| 1.  | 2.  | 3.  |
|    |    |    |
| Just over 1 litre   | About 2 litres  | Nearly 5 litres   |
| 4.  | 5.  | 6.  |
|   |   |   |
| Just less than 6 litres   | Just over 3 litres  | About half a litre  |
| 7.  | 8.  | 9.  |
|  |  |  |
| 3 and a bit litres  | About 6 litres  | Just under 4 litres   |

10. Which bucket is holding about 5000 ml?

\_\_\_\_\_



I can use scales

Measure: Understanding and explaining

