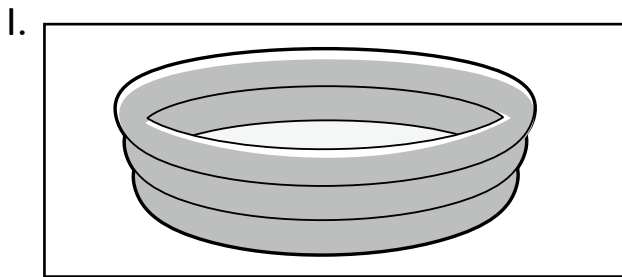


One litre


Decide whether each container in real-life holds more or less than one litre. Tick your answer.



more than one litre



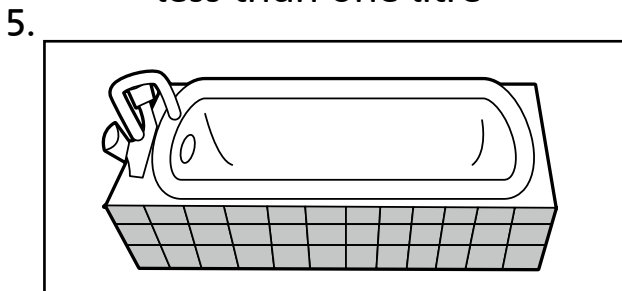
less than one litre



more than one litre




less than one litre



more than one litre



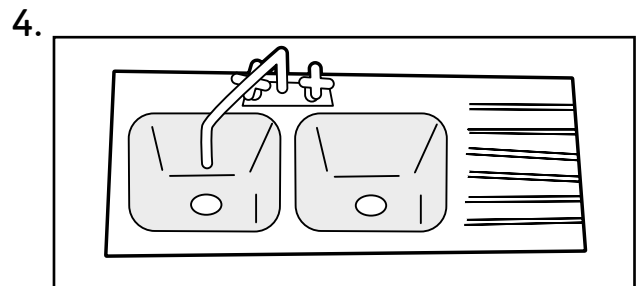
less than one litre



more than one litre



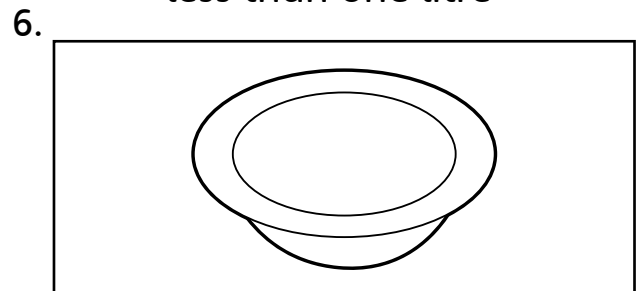
less than one litre



more than one litre



less than one litre



more than one litre



less than one litre

7. Think of something that holds more than 10 litres. What is it?

8. Think of something that holds less than $\frac{1}{2}$ litre. What is it?



I can estimate more or less than a litre

