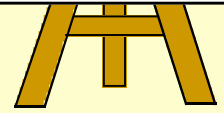


Chapter 4

Digital Clocks

Time 1

Be able to tell the time on a digital clock.



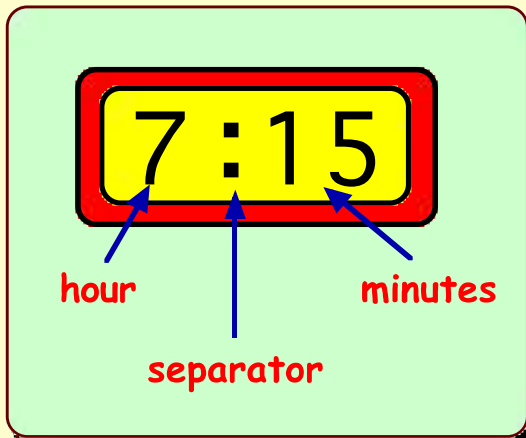
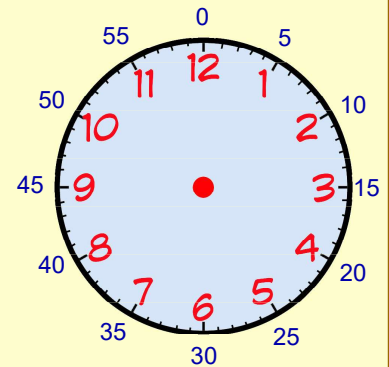
Remember - There are 60 minutes in an hour.

Half Past is 30 minutes after the hour.

Quarter past is 15 minutes after the hour.

Quarter to is 15 minutes before the hour.

Digital clocks show the time using only numbers.



8:00

means 8 o'clock.

2:30

means half past 2.

6:15

means quarter past 6.

3:45

means quarter to 4.

45 minutes past 3 is the same as 15 minutes to 4.

Exercise 1

Worksheet 4.1

1. Write the time shown on each clock using words :-

a **4:30**

(half past ...)

b **5:15**

(quarter past ...)

c **1:45**

(quarter to ...)

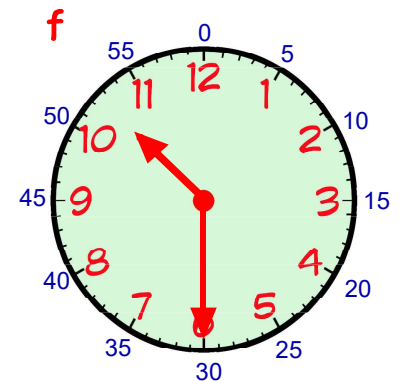
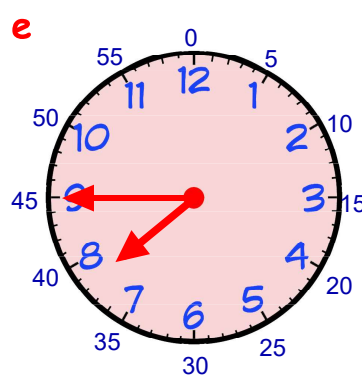
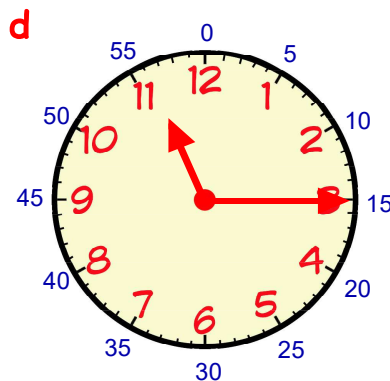
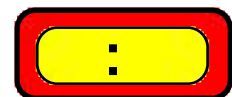
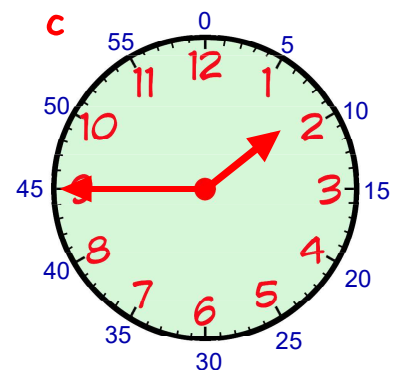
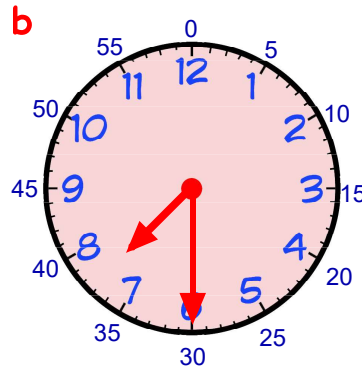
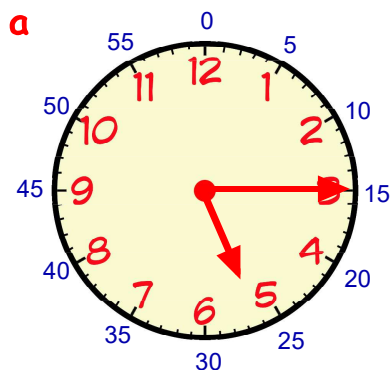
d **8:30**

e **9:00**

f **6:45**



2. For each clock below, draw a digital clock to show the same time :-



Worksheet 4.2

3. Write each time on a digital clock :-

a half past 9

b quarter past 1

c quarter to 9

d quarter past 3

e quarter to 12

f half past 2

g quarter past 7

h quarter to 11

i half past 6.