




# How many?


Write the number of pieces of fruit. What do you notice about the numbers?

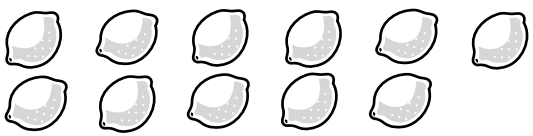
1.   
 $2\frac{1}{2}$  bananas


2.   
 \_\_\_\_\_ bananas


3.   
 \_\_\_\_\_ cherries


4.   
 \_\_\_\_\_ cherries


5.   
 \_\_\_\_\_ lemons


6.   
 \_\_\_\_\_ lemons


7.   
 \_\_\_\_\_ apples

8.   
 \_\_\_\_\_ apples

9.   
 \_\_\_\_\_ oranges

10.   
 \_\_\_\_\_ oranges

11.   
 \_\_\_\_\_ pineapples

12.   
 \_\_\_\_\_ pineapples



I can write a half in numbers

