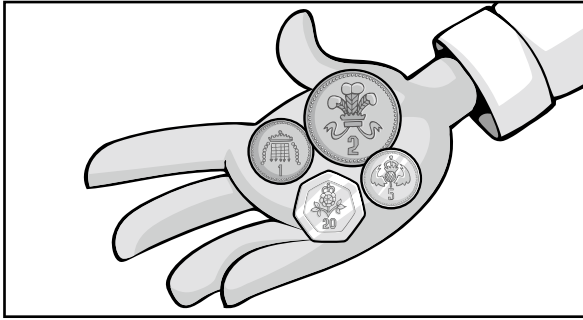


# Which to use?


Tick the coins or notes you would use to pay each price.  
You want as little change as possible.

1. 8p



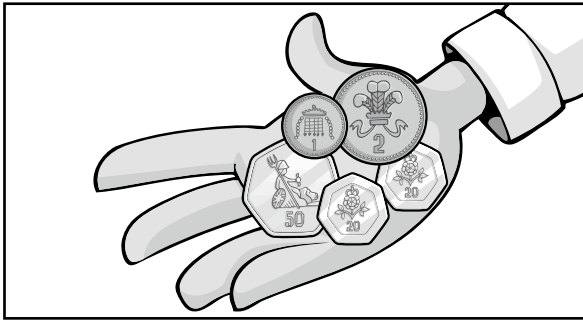
\_\_\_\_\_

2. £1.20



\_\_\_\_\_

3. 26p



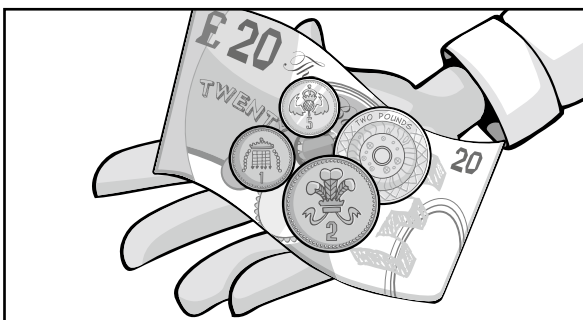
\_\_\_\_\_

4. £1.50



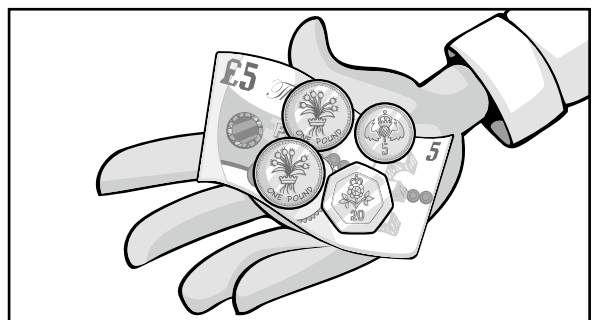
\_\_\_\_\_

5. £2.75



\_\_\_\_\_

6. £6.07



\_\_\_\_\_

7. Now work out the change you would get. Write the answer underneath each question.



I can choose the best coins or notes to use

