



Calculate
 $500 \div 10$


2 How many days are there in October?



3 How many 10p's are there in £4.50?




4 Today is Star Wars day. In episode V, what number does the V stand for?



5

$$\begin{array}{r} 83 \\ + 57 \\ \hline \end{array}$$

6 Round 7.5 litres to the nearest litre.




7 In the number 375 268 what does the 8 stand for?


8 Today is No Socks day. How many socks are in 58 pairs?



9 Write the number 909 090 in words



10 Today is 'clean up your room' day. Cari began cleaning her room at 4:30 pm and finished 15 minutes later. What time did she finish?




11 Today is National Windmill Day. How many lines of symmetry does this windmill have?




12 If today is Thursday, what day was it four days ago?

13 Calculate 3×13

14 Write the time shown here in words



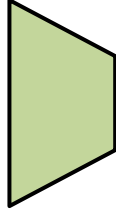
15 Write the 15th of December 1992 as numbers only.



16


$$\begin{array}{r} 64 \\ - 28 \\ \hline \end{array}$$

17 What is the name of this 2D shape?



18 Today is Visit Your Relatives day. Granny Smith shares 36 pound coins equally between Max and her 3 other grandchildren. How much do they each receive?

19 Write these numbers in order from the smallest to the biggest; 263, 203, 253, 223



20


$$\begin{array}{r} 83 \\ \times 3 \\ \hline \end{array}$$

21 Write the following in 24 hour time...

6:45 pm

22 Write the next two numbers this sequence. 4, 8, 12, 16, ...

23 Today is Lucky Penny day. What shape is a penny?

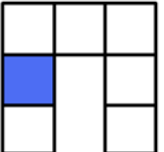


24 What number is 300 more than 2800?


25

$$\begin{array}{|c|c|c|} \hline 4 & 7 & 6 \\ \hline \end{array}$$


26 What fraction of this shape is shaded?



27 What is the value of the missing number represented by the shape below?

 - 4 = 8


28 Today is National Hamburger day. A Big Mac costs £3.19. How much change from £5?



29 Is this statement true or false?

$$\frac{1}{2} < \frac{1}{4}$$

30 Today is Water a Flower day. How many millilitres are in a litre of water?



31 Which is bigger? $23 + 76$ or 12×8
Give a reason for your answer!