

Elapsed Time

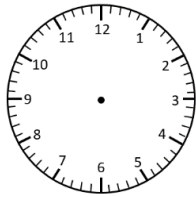
1 hour/30 Minute Intervals

Read the time. Add on the elapsed time and write the new time (analogue and digital).

Start Time

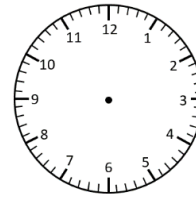
Elapsed Time

End Time

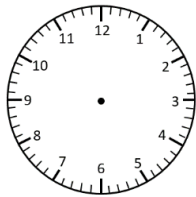


9:30 am

+ 1 hour

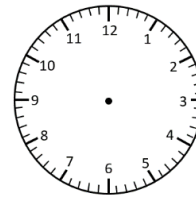


___ : ___

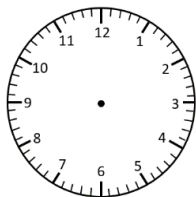


5:00 pm

+ 2 hours

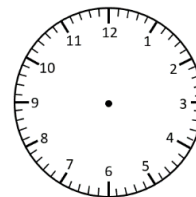


___ : ___

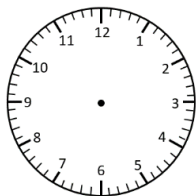


4:00 pm

+ 30 minutes

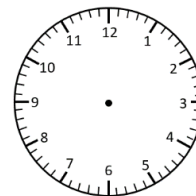


___ : ___

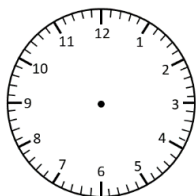


10:30 am

+ 30 minutes

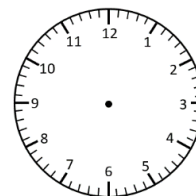


___ : ___

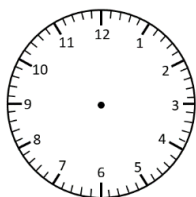


8:30 am

+ 2 hours

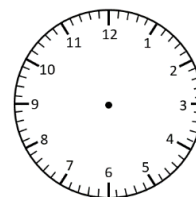


___ : ___



4:30 pm

+ 30 minutes



___ : ___

Elapsed Time **Answers**

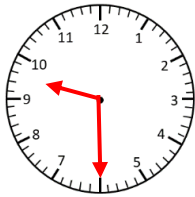
1 hour/30 Minute Intervals

Read the time. Add on the elapsed time and write the new time (analogue and digital).

Start Time

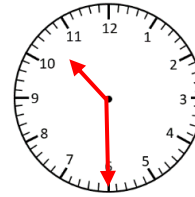
Elapsed Time

End Time

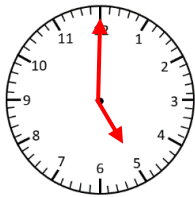


9:30 am

+ 1 hour

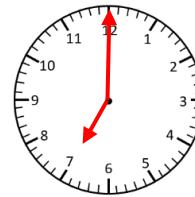


10:30 am

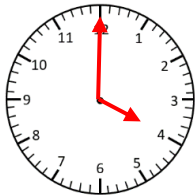


5:00 pm

+ 2 hours

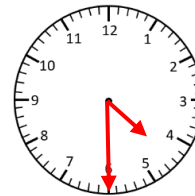


7:00 pm

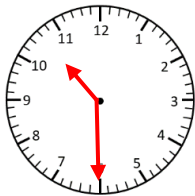


4:00 pm

+ 30 minutes

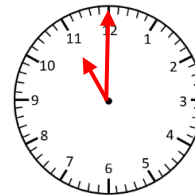


4:30 pm

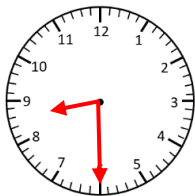


10:30 am

+ 30 minutes

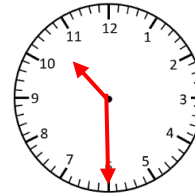


11:00 am

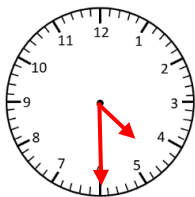


8:30 am

+ 2 hours

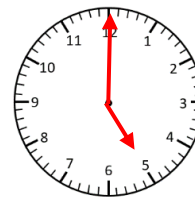


10:30 am



4:30 pm

+ 30 minutes



5:00 pm