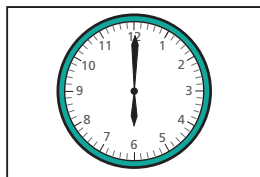
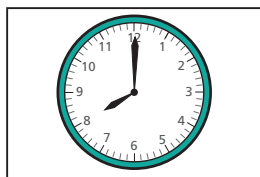


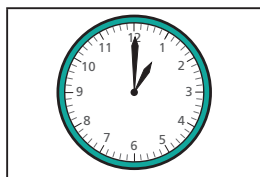
1 Match the clocks to the times.



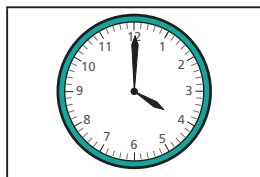
8 o'clock



6 o'clock

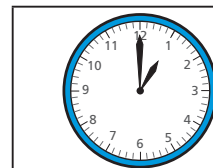


4 o'clock

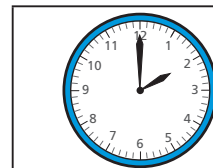


1 o'clock

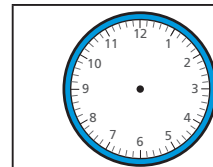
2 Complete the pattern.



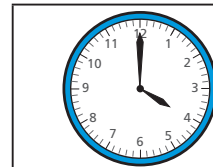
1 o'clock



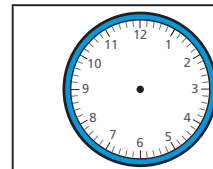
\_\_\_\_\_ o'clock



3 o'clock



4 o'clock

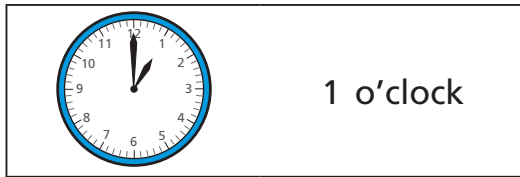


\_\_\_\_\_ o'clock

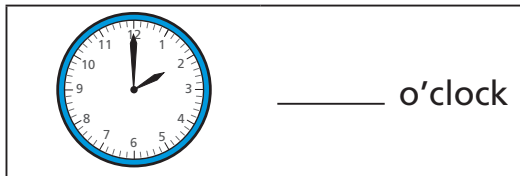
What time comes next?



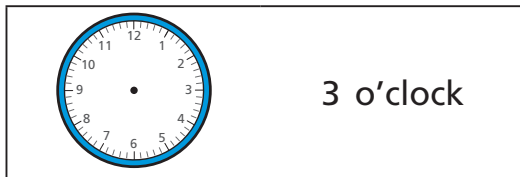
2 Complete the pattern.



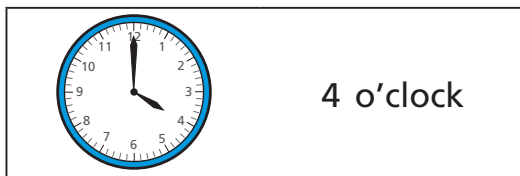
1 o'clock



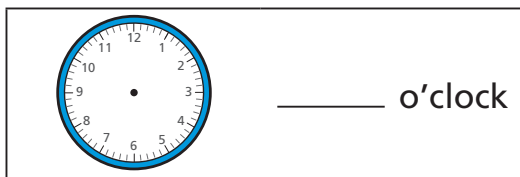
\_\_\_\_\_ o'clock



3 o'clock



4 o'clock




\_\_\_\_\_ o'clock

What time comes next?

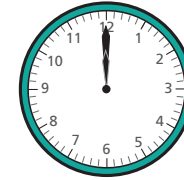


3 Which time matches the clock?



3 o'clock

12 o'clock





3 o'clock


12 o'clock

4 Which time is more likely?

a) Mo goes to school.



b) Mo goes to bed.



c) Mo has lunch.

