


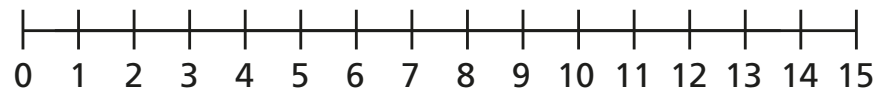
1 Rosie has 15 cakes.



Her friends eat 6 cakes.
How many cakes does Rosie have left?

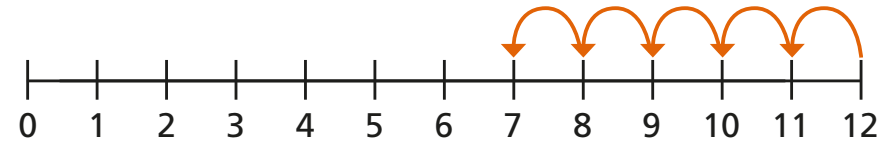


2 Jack has 13 stickers.
He gives 7 stickers to Dora.
How many stickers does Jack have left?

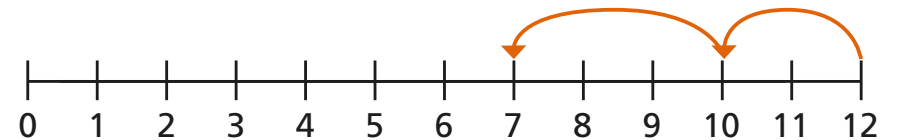


3 Ron and Eva have worked out $12 - 5$ on a number line.

Ron's method



Eva's method



- What is the same and what is different?
- Use Eva's method to work out the subtractions.

$$12 - 6$$

$$15 - 8$$

$$14 - 9$$

4 Fill in the missing numbers.

$$14 - \square = 8$$

$$\square - 6 = 7$$

