

Look at the pictures below.  
Which dinosaur is taller?

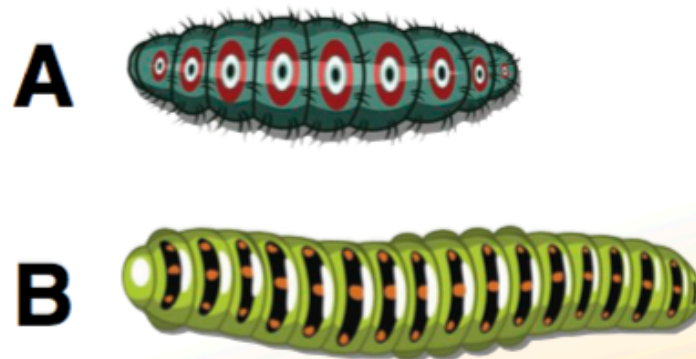


1

A

B

Look at the pictures below.  
Which caterpillar is longer?



2

A

B

Look at the lines below.  
Which line is longer?

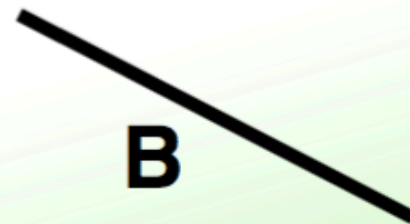
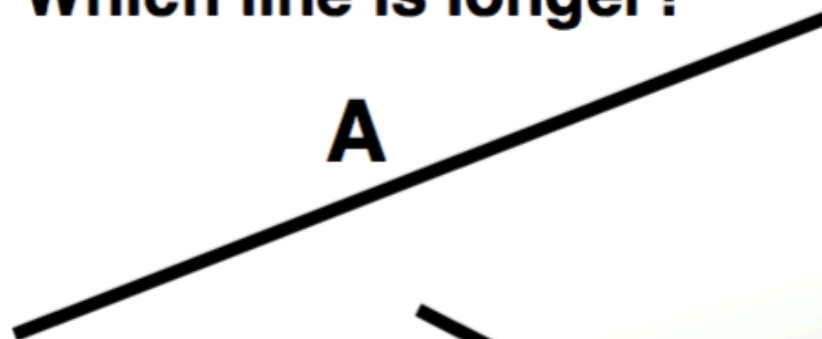


3

A

B

Look at the lines below.  
Which line is longer?



4

A

B