

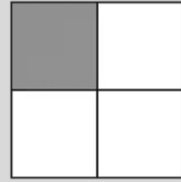
Quarter Consolidation Sheet

Name: _____

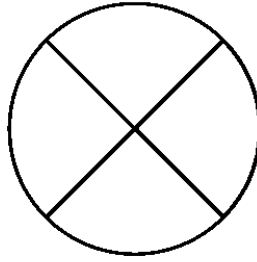
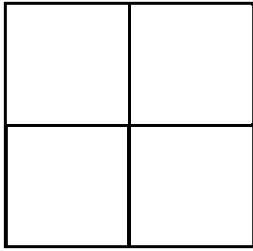
Date: _____

$$\frac{1}{4}$$



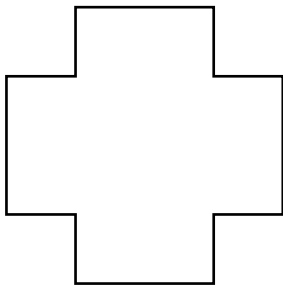
quarter



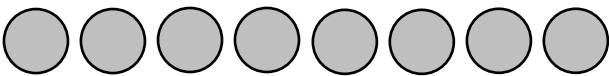
- Shade $\frac{1}{4}$ of each shape...



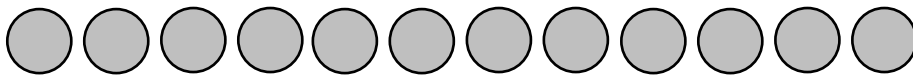
- Find and shade $\frac{1}{4}$ of each shape...



- Circle $\frac{1}{4}$ of each set...



$\frac{1}{4}$ of 8 =



$\frac{1}{4}$ of 12 =

- Use cubes or other apparatus to work out the following...

$\frac{1}{4}$ of 20 =

$\frac{1}{4}$ of 16 =

$\frac{1}{4}$ of 4 =

$\frac{1}{4}$ of 24 =

$\frac{1}{4}$ of 32 =

$\frac{1}{4}$ of 28 =

LO: To identify more than, less than and half of a shape.

