



1. This pizza has been cut into two equal slices.
What do you call each **slice** ?



2.

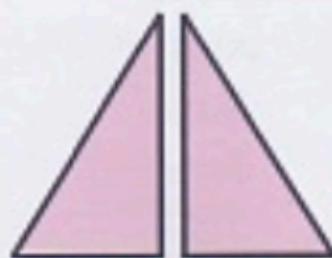


- Jamie was given 4 cherries.
He ate **1** of the 4 cherries.
What **fraction** did Jamie eat ?

3. Which of these shapes are split into **two equal halves** ?



shape A

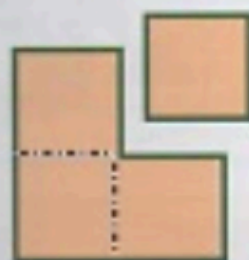


shape B



shape C

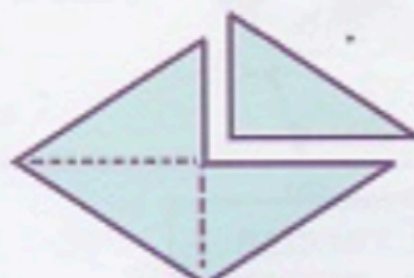
4. In which of these shapes has a **quarter** been removed ?



shape A



shape B



shape C

5. Find :-

- a half of 18
- b 6 divided by 2
- c 32 divided by 4
- d half of 14
- e a quarter of 40

- f $20 \div 2$
- g a quarter of 36
- h $16 \div 4$
- i $20 \div 4$
- j $20 \div 2$