

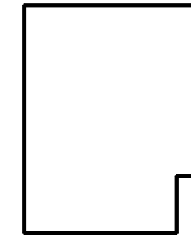
S2 graphic communication

1 POINT PERSPECTIVE HOMEWORK

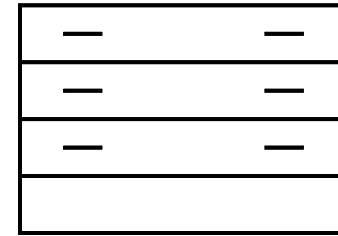
No 1

Draw a 1 point perspective drawing of the drawer unit shown opposite

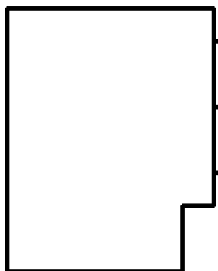
Use the vanishing point and end elevation which are given.



END ELEVATION



ELEVATION



NAME..... PRACTICAL SECTION..... GRADE