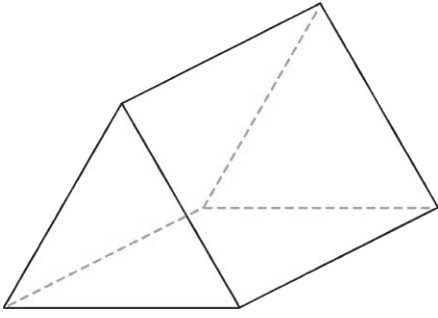


3D Shapes

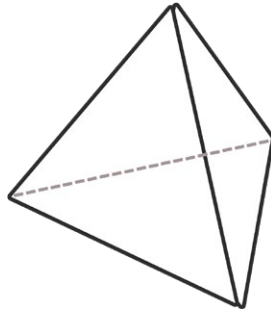


Triangular Prism

edges _____

faces/surfaces _____

vertices _____

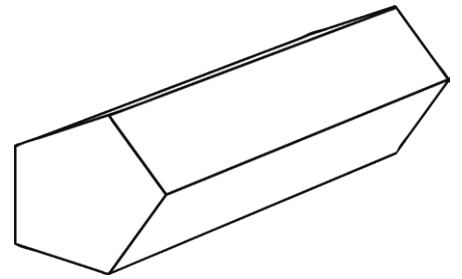


Tetrahedron

edges _____

faces/surfaces _____

vertices _____

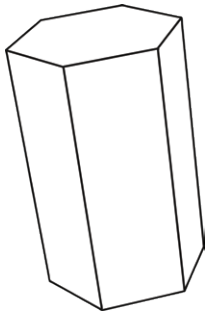


Pentagonal Prism

edges _____

faces/surfaces _____

vertices _____

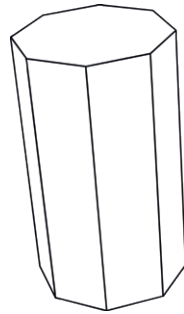


Hexagonal Prism

edges _____

faces/surfaces _____

vertices _____

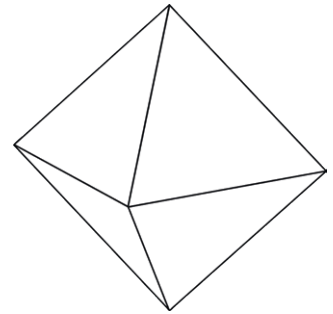


Octagonal Prism

edges _____

faces/surfaces _____

vertices _____



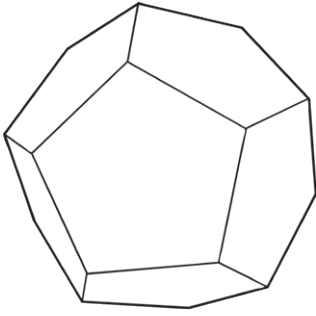
Octahedron

edges _____

faces/surfaces _____

vertices _____

3D Shapes

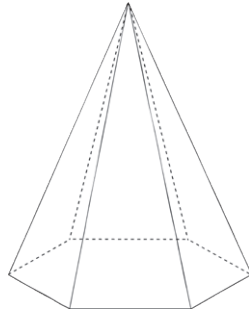


Dodecahedron

edges _____

faces/surfaces _____

vertices _____

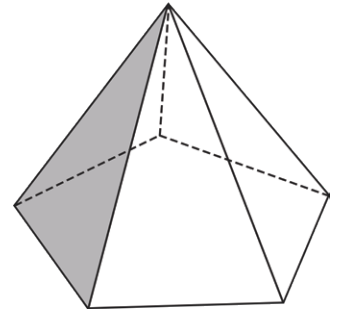


Hexagonal Pyramid

edges _____

faces/surfaces _____

vertices _____



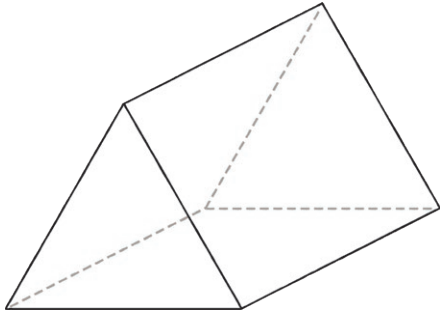
Pentagonal Pyramid

edges _____

faces/surfaces _____

vertices _____

3D Shapes Answers

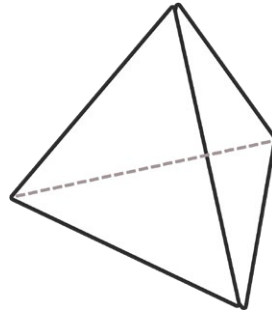


Triangular Prism

edges **9**

faces/surfaces **5**

vertices **6**

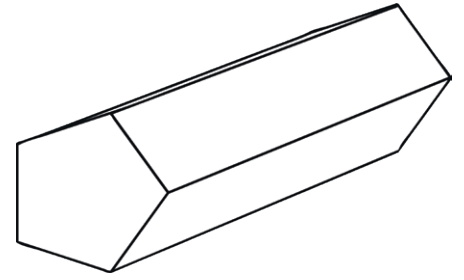


Tetrahedron

edges **6**

faces/surfaces **4**

vertices **4**

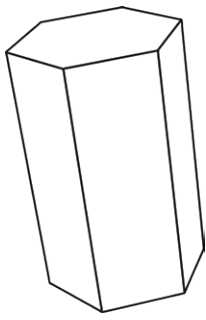


Pentagonal Prism

edges **15**

faces/surfaces **7**

vertices **10**



Hexagonal Prism

edges **18**

faces/surfaces **8**

vertices **12**

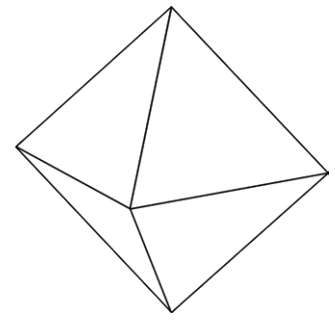


Octagonal Prism

edges **24**

faces/surfaces **10**

vertices **16**

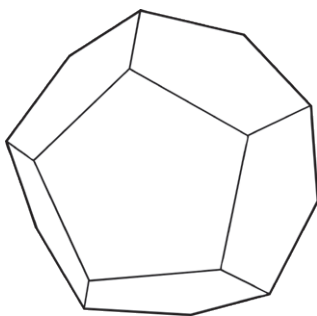


Octahedron

edges **12**

faces/surfaces **8**

vertices **6**

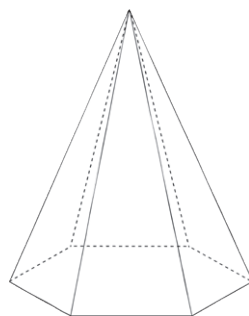


Dodecahedron

edges **30**

faces/surfaces **12**

vertices **20**

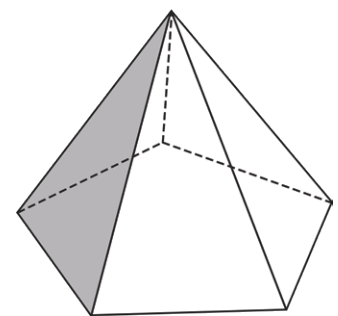


Hexagonal Pyramid

edges **12**

faces/surfaces **7**

vertices **7**



Pentagonal Pyramid

edges **10**

faces/surfaces **6**

vertices **6**