

Fractions

Shade a quarter of each set. Write the missing numbers and fractions.

1.




$$\boxed{\frac{1}{4}} \text{ of } 8 = \boxed{}$$

2.




$$\boxed{} \text{ of } 12 = \boxed{}$$

3.



$$\boxed{} \text{ of } 24 = \boxed{}$$

4.




$$\boxed{} \text{ of } 20 = \boxed{}$$

5.



$$\boxed{} \text{ of } 4 = \boxed{}$$

6.



$$\boxed{} \text{ of } 16 = \boxed{}$$



I can make quarters of a group of objects and write them as fractions

