

Year 2 Sports Day

Differentiated Maths Challenge Cards

twinkl

Year 2 Sports Day Differentiated Maths Challenge Cards



1. Jia, Bisma, Sadie, Nikita and Felix scored ten points each for the red team. How many points does the red team have so far?



Year 2 Sports Day Differentiated Maths Challenge Cards



2. The blue team had 32 points before Lowri scored 7 points in the hurdles. How many points do they have now?



Year 2 Sports Day Differentiated Maths Challenge Cards



3. Eli had finished all the sports day activities in 50 minutes. Seren took 20 minutes to do the first half and another 20 minutes to do the second half. Who finished the activities in the quickest time?





4. There have been 33 running races so far. Write the number as a word.



5. Marcel jumped 48cm, Neville jumped 55cm and Gethin jumped 52cm in the long jump. Compare these jumps by filling in the gaps below with the signs $<$ and $>$.


Marcel's jump Neville's jump

Neville's jump Gethin's jump

Gethin's jump Marcel's jump





6. These are the scores from today's three-legged race:



Which team had the highest score and which team had the lowest score?



7. Jia, Rasha, Carter, Turkan, Mei and Aisha each threw the ball once. Each throw scored 3 points. How many points did they score altogether?







8. At half time, the yellow team was scoring 87 but they had to have 24 points taken off. What was the yellow team's real score?



9. There were 9 activities, which each needed 5 cones. How many cones did they need altogether?



10. At the start of the day, 35 bibs were shared out between the 5 teams. How many bibs did each team have?



Year 2 Sports Day Differentiated Maths Challenge Cards - Answers

1. 50
2. 39
3. Seren
4. thirty-three
5. Marcel's jump < Neville's jump
Neville's jump > Gethin's jump
Gethin's jump > Marcel's jump
6. highest score – green team
lowest score – red team
7. 18
8. 63
9. 45
10. 7