

Fill in the Missing Numbers

20				20	What number comes before 9?
	19				
					What number comes before 14?
16	17		17		
					What number comes before 19?
	15				
		14			
13	13		12		
					What number comes after 7?
10	11				
		9			What number comes after 11?
7			8		What number comes after 16?
6					
	5				
		4			
2			3		
0	0			0	

Get out some old wall paper and use the back to make a long number ladder.
What number games can you play on your ladder? Blog and share them with us.


make 5	make 6	make 7
4 +	5 +	4 +
3 +	3 +	6 +
1 +	4 +	3 +
2 +	1 +	5 +
..... + 3 + 2 + 1
..... + 1 + 4 + 2
..... + 2 + 3 + 4
make 8	make 9	make 10
4 +	8 +	7 +
6 +	6 +	5 +
5 +	5 +	4 +
3 +	4 +	8 +
..... + 1 + 2 + 3
..... + 4 + 3 + 9
..... + 2 + 1 + 6
..... + 7 + 4 + 2

Maths Home work options:
Do a little everyday.
Keep up your skills!
Sumdog also a great way to keep using your number skills.


Big P1 Word Problems on page 2.
Pictures on the blog please!!

Reading Clocks
Keep working with your clock.
Now try reading the clocks on page 3 - How did you get on?

Numbers to 30...
Keep reading and writing numbers.
Keep practising adding one and taking one away—in your head.
Collect things in the garden or on a walk:
20 stones
24 leaves



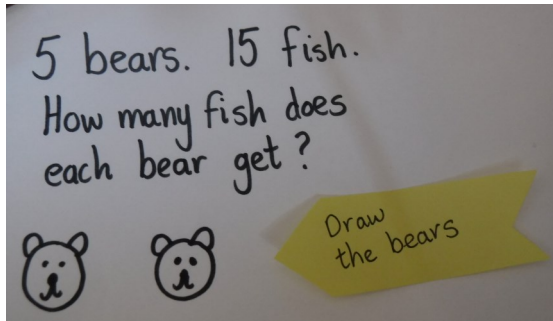


Roll 2 dice.
Add the 2 numbers together
 $4 + 1 = 5$



Roll 2 dice.
Take the small number away from the big number
 $5 - 2 = 3$

Drawing pictures to solve word problems.



Miller has 20 fish in his tank. 6 jump out and swim away. How many left in the tank?

Grace has 20p in her purse. She buys a book for 5p and a toy for 5p. How much money has she got left?

Owen has 4p. Brody has 6p. Who has most money? How much more?

14 rabbits. 2 carrots each. How many carrots altogether?

30 apples. 10 children. How many apples does each child get?

12 people on the bus.....5 get on.....7 get off.....3 get on.....How many people on the bus?

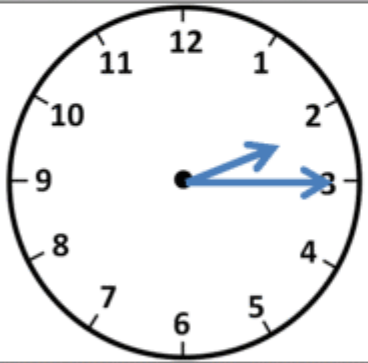
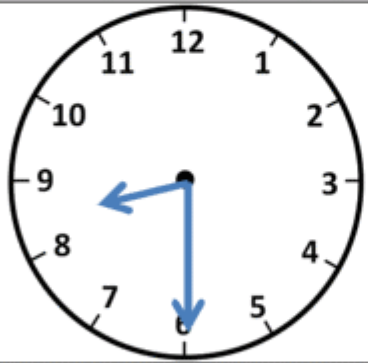
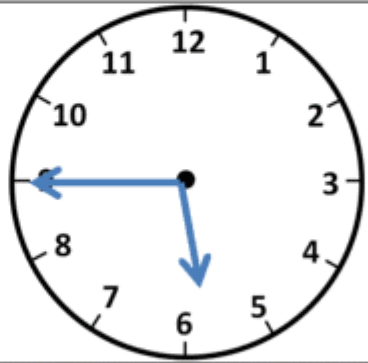

Tasnim has 10 flowers. She gives 2 to Miss Stapleton and 3 to her mum. How many has she got left?

Olly has 10 cakes. He eats 7. How many left?

Brody counts his money. He has a 2p coin, three 1p coins and a 10p coin. How much money does he have?

8 squirrels. 24 nuts. How many nuts does each squirrel get?

Write the correct time underneath each clock. The first one has been done for you.

			
Quarter past 2			
