

Name _____

Date _____



TELLING THE TIME - QUARTER PAST SHEET 1

Write the correct time underneath each clock. The first one has been done for you.

Quarter past 1	Quarter past ____	Quarter past ____
Quarter past ____	Quarter past ____	Quarter past ____
Quarter past ____	Quarter past ____	Quarter past ____

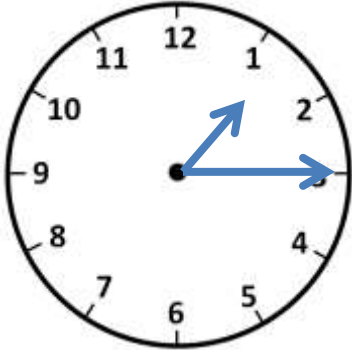
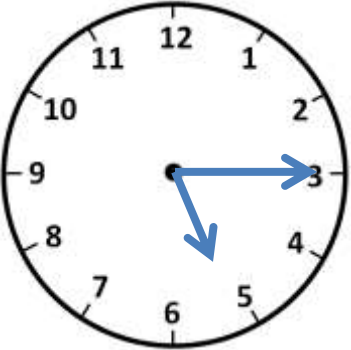
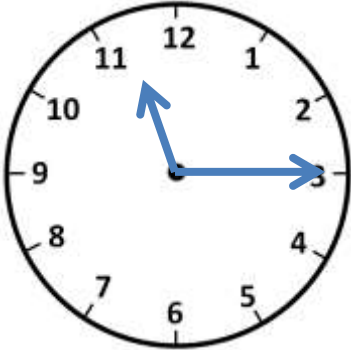
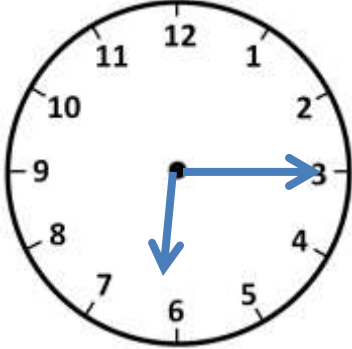
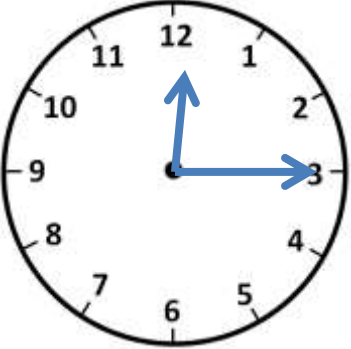
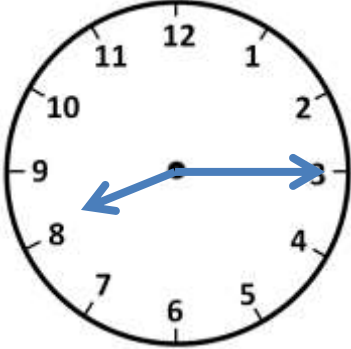
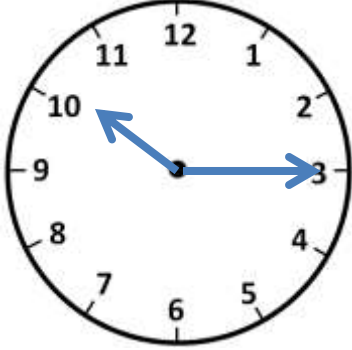
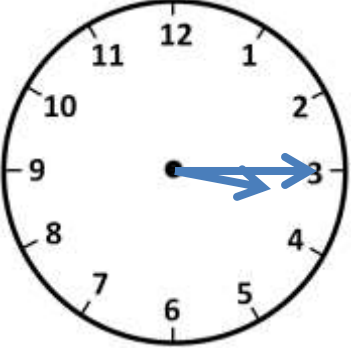
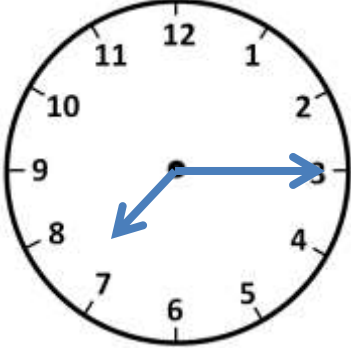


Name

Date



TELLING THE TIME - QUARTER PAST SHEET 1 ANSWERS

		
Quarter past <u>1</u>	Quarter past <u>5</u>	Quarter past <u>11</u>
		
Quarter past <u>6</u>	Quarter past <u>12</u>	Quarter past <u>8</u>
		
Quarter past <u>10</u>	Quarter past <u>3</u>	Quarter past <u>7</u>

