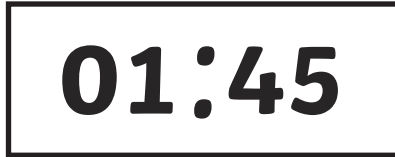



# Digital Time – Quarter To

What is the time?

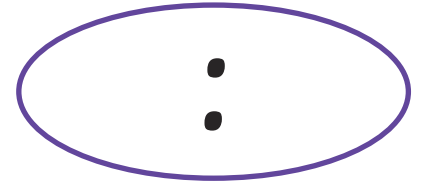
Write digits in the clocks to show the time. The first one has been done for you.



quarter to 2




quarter to 5




quarter to 10




quarter to 8




quarter to 12




quarter to 3



quarter to 9




quarter to 7




quarter to 1



quarter to 4



quarter to 11



quarter to 6

# Digital Time – Quarter To Answers

What is the time?

Write digits in the clocks to show the time. The first one has been done for you.

**01:45**

quarter to 2

**04:45**

quarter to 5

**09:45**

quarter to 10

**07:45**

quarter to 8

**11:45**

quarter to 12

**02:45**

quarter to 3

**08:45**

quarter to 9

**06:45**

quarter to 7

**12:45**

quarter to 1

**03:45**

quarter to 4

**10:45**

quarter to 11

**05:45**

quarter to 6